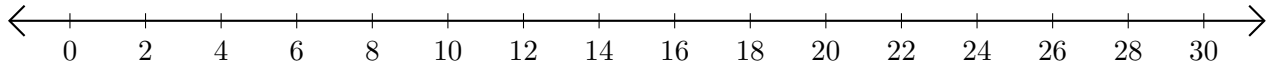


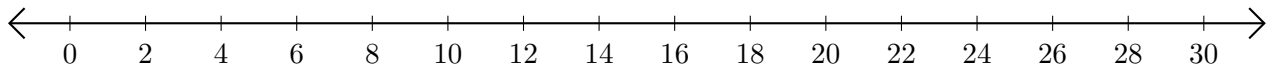
Subtracting on Number Lines (A)

Use the number lines to calculate each difference.

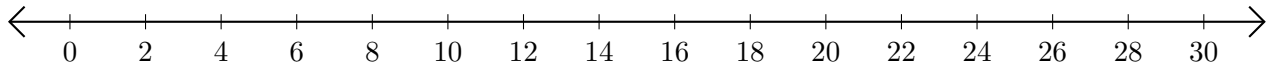
1. $26 - 20 = \underline{\quad}$



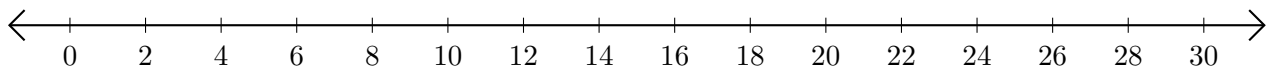
2. $16 - 2 = \underline{\quad}$



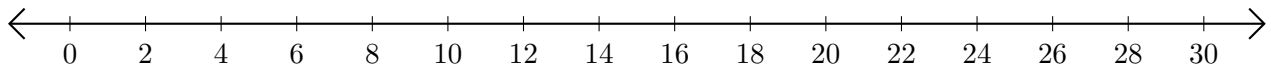
3. $30 - 22 = \underline{\quad}$



4. $16 - 10 = \underline{\quad}$



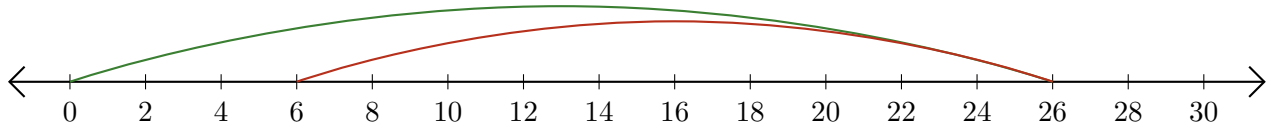
5. $30 - 4 = \underline{\quad}$



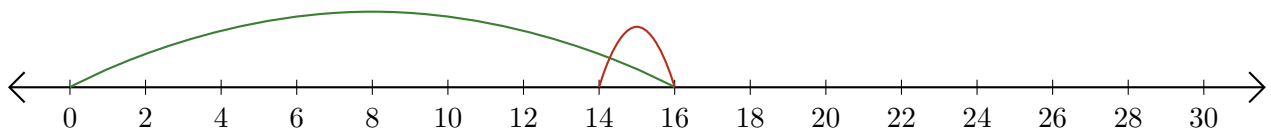
Subtracting on Number Lines (A) Answers

Use the number lines to calculate each difference.

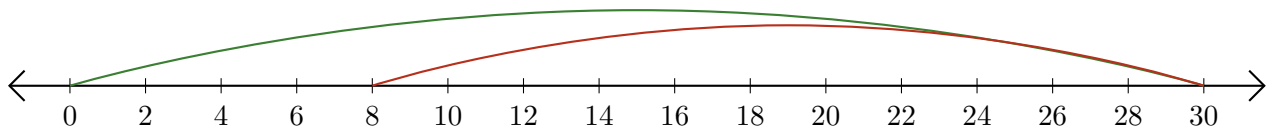
1. $26 - 20 = \underline{6}$



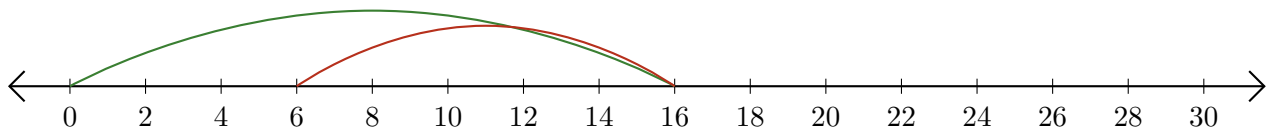
2. $16 - 2 = \underline{14}$



3. $30 - 22 = \underline{8}$



4. $16 - 10 = \underline{6}$



5. $30 - 4 = \underline{26}$

