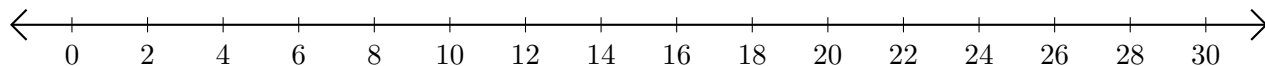


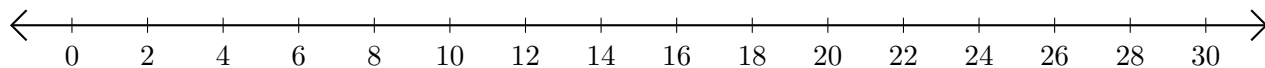
Subtracting on Number Lines (B)

Use the number lines to calculate each difference.

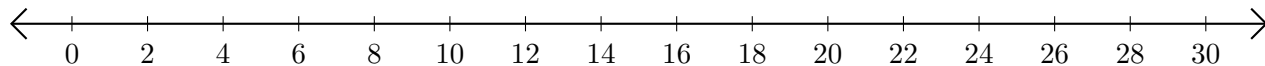
1. $14 - 10 = \underline{\quad}$



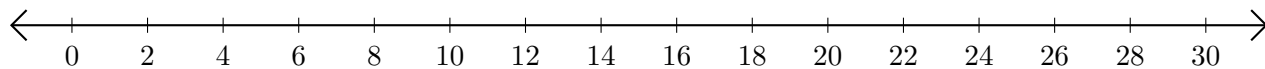
2. $28 - 22 = \underline{\quad}$



3. $8 - 2 = \underline{\quad}$



4. $16 - 14 = \underline{\quad}$



5. $30 - 18 = \underline{\quad}$

