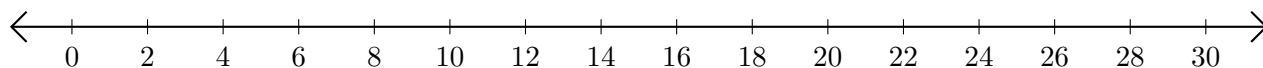


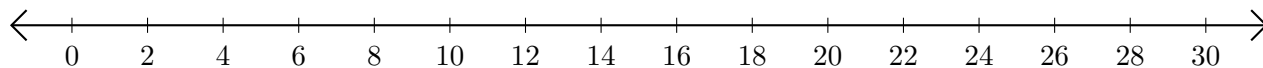
Subtracting on Number Lines (C)

Use the number lines to calculate each difference.

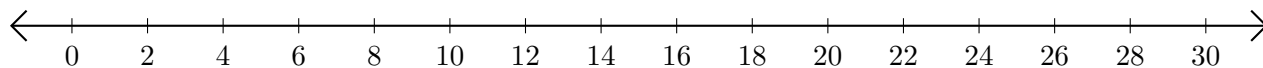
1. $24 - 14 = \underline{\quad}$



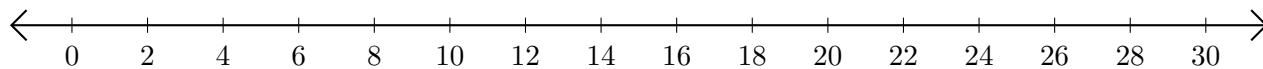
2. $30 - 26 = \underline{\quad}$



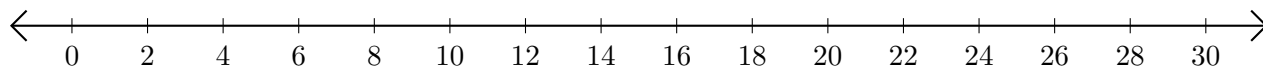
3. $28 - 24 = \underline{\quad}$



4. $28 - 18 = \underline{\quad}$



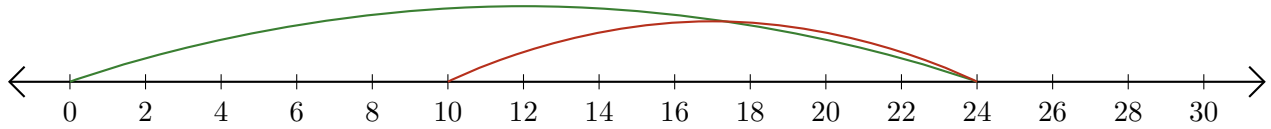
5. $22 - 6 = \underline{\quad}$



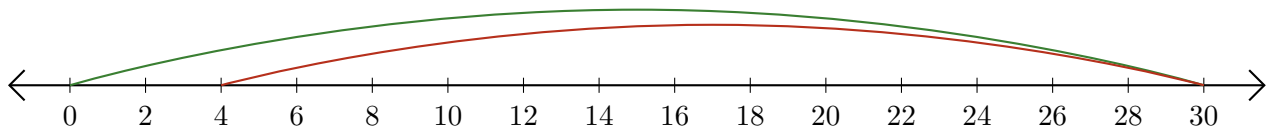
Subtracting on Number Lines (C) Answers

Use the number lines to calculate each difference.

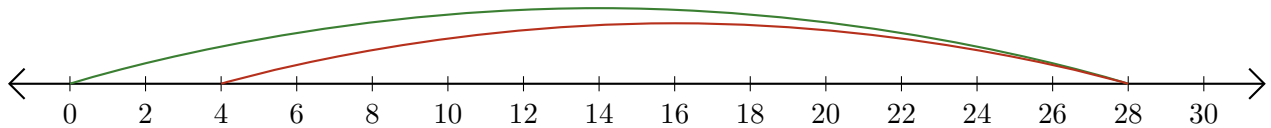
1. $24 - 14 = \underline{10}$



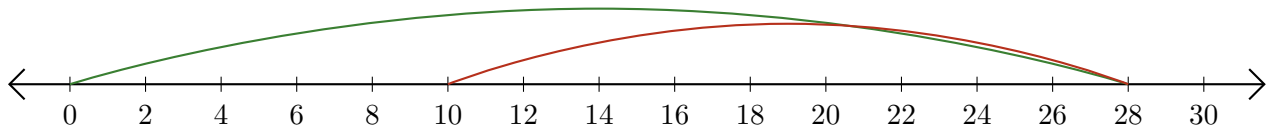
2. $30 - 26 = \underline{4}$



3. $28 - 24 = \underline{4}$



4. $28 - 18 = \underline{10}$



5. $22 - 6 = \underline{16}$

