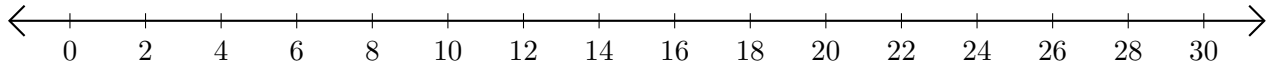


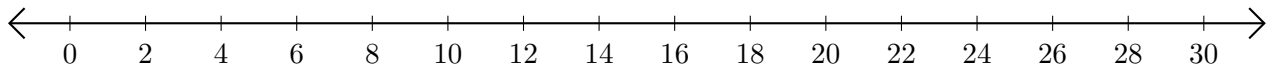
Subtracting on Number Lines (E)

Use the number lines to calculate each difference.

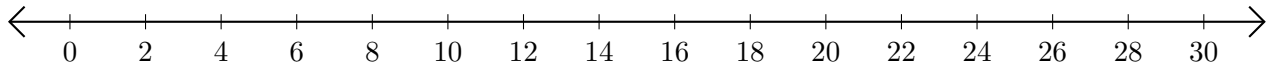
1. $22 - 14 = \underline{\quad}$



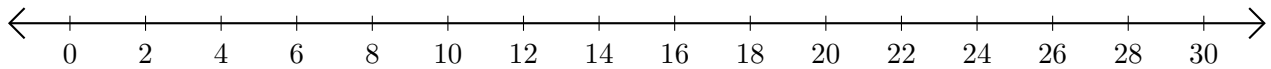
2. $22 - 8 = \underline{\quad}$



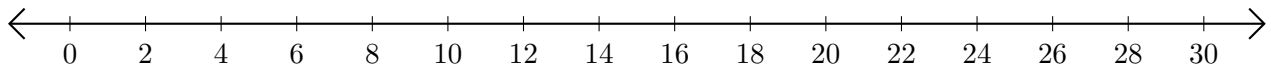
3. $24 - 16 = \underline{\quad}$



4. $30 - 24 = \underline{\quad}$



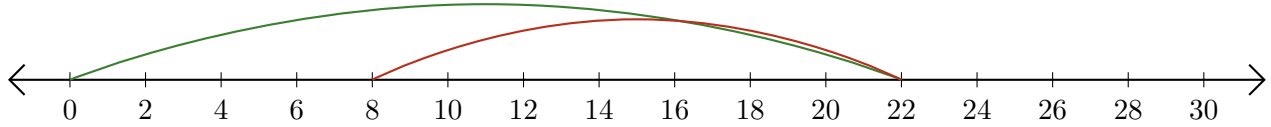
5. $26 - 2 = \underline{\quad}$



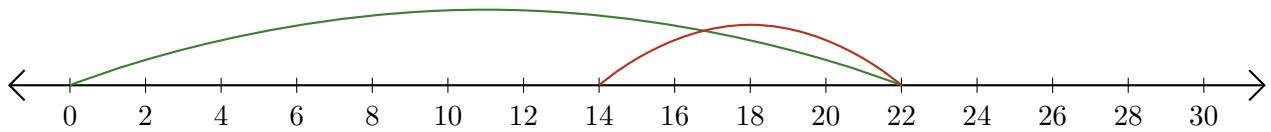
Subtracting on Number Lines (E) Answers

Use the number lines to calculate each difference.

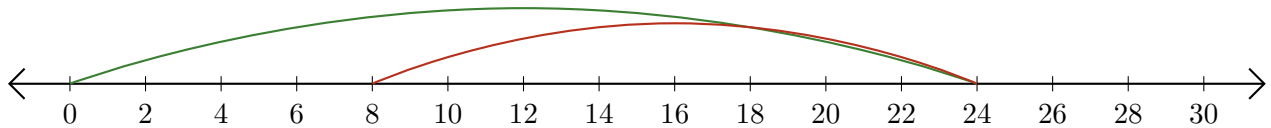
1. $22 - 14 = \underline{8}$



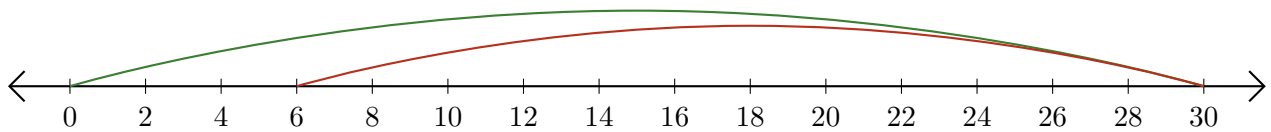
2. $22 - 8 = \underline{14}$



3. $24 - 16 = \underline{8}$



4. $30 - 24 = \underline{6}$



5. $26 - 2 = \underline{24}$

