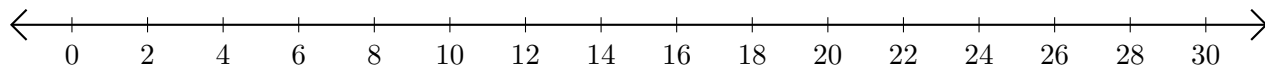


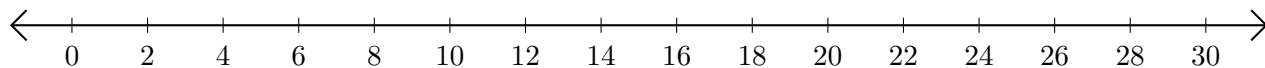
Subtracting on Number Lines (I)

Use the number lines to calculate each difference.

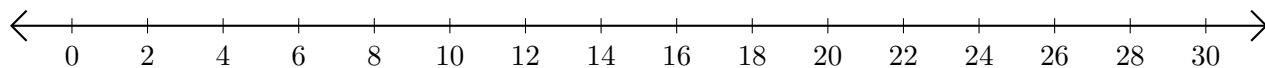
1. $30 - 8 = \underline{\quad}$



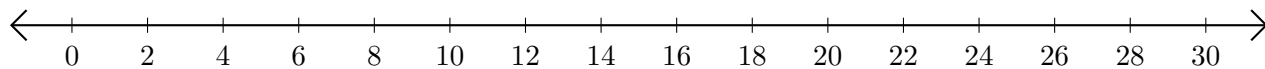
2. $16 - 14 = \underline{\quad}$



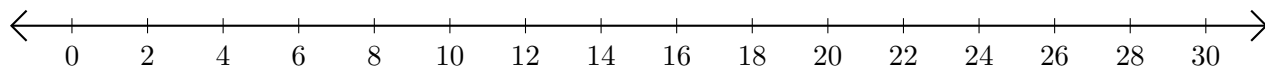
3. $30 - 18 = \underline{\quad}$



4. $24 - 20 = \underline{\quad}$



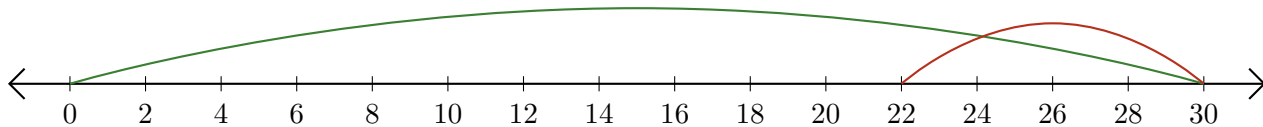
5. $30 - 28 = \underline{\quad}$



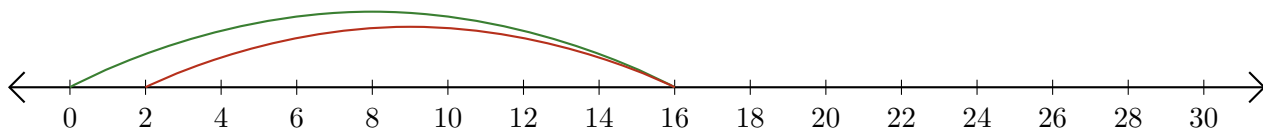
Subtracting on Number Lines (I) Answers

Use the number lines to calculate each difference.

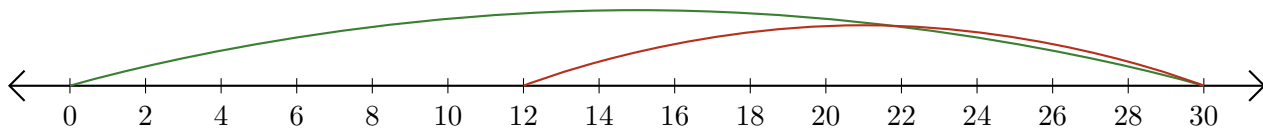
1. $30 - 8 = \underline{22}$



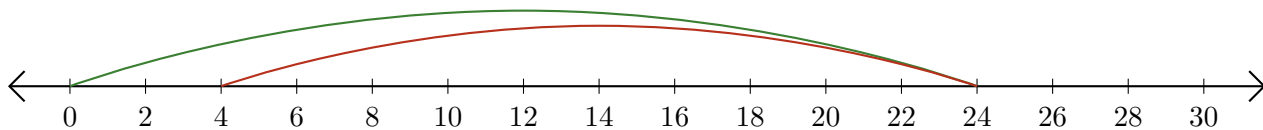
2. $16 - 14 = \underline{2}$



3. $30 - 18 = \underline{12}$



4. $24 - 20 = \underline{4}$



5. $30 - 28 = \underline{2}$

