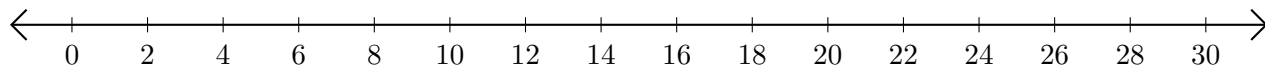


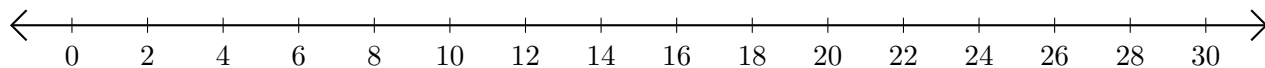
Subtracting on Number Lines (I)

Use the number lines to calculate each difference.

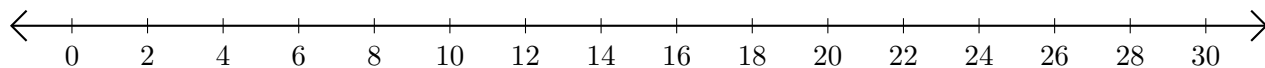
1. $30 - 8 = \underline{\quad}$



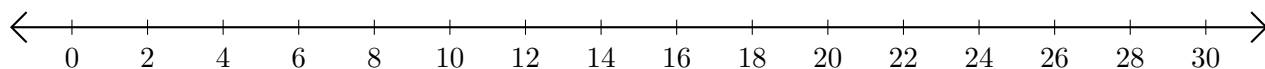
2. $16 - 14 = \underline{\quad}$



3. $30 - 18 = \underline{\quad}$



4. $24 - 20 = \underline{\quad}$



5. $30 - 28 = \underline{\quad}$

