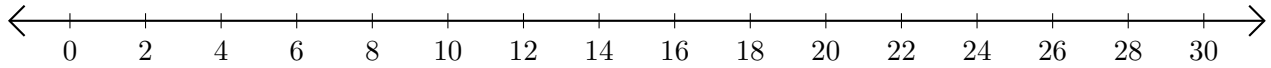


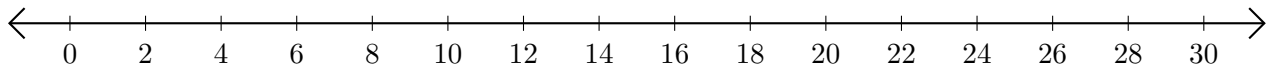
# Subtracting on Number Lines (J)

Use the number lines to calculate each difference.

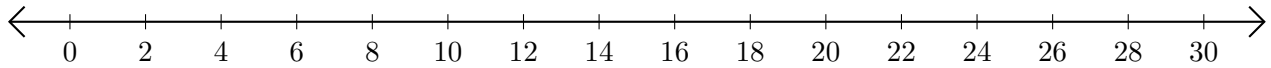
1.  $30 - 26 = \underline{\quad}$



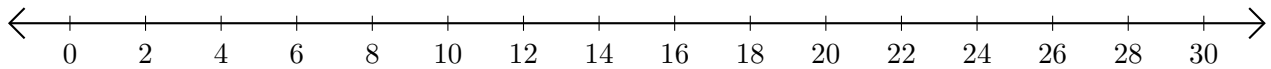
2.  $22 - 16 = \underline{\quad}$



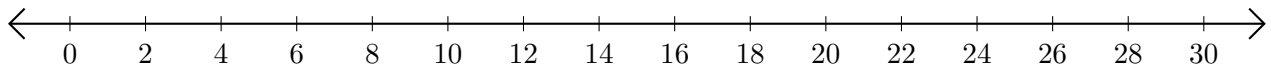
3.  $22 - 20 = \underline{\quad}$



4.  $26 - 22 = \underline{\quad}$



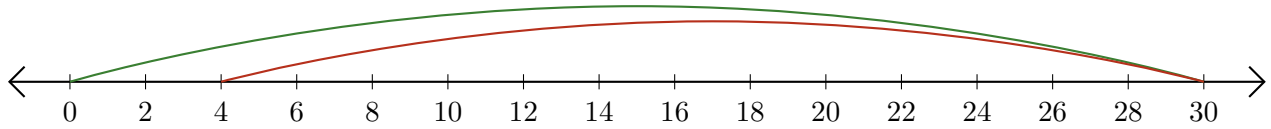
5.  $30 - 18 = \underline{\quad}$



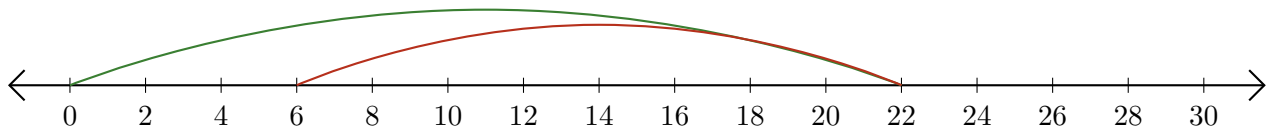
# Subtracting on Number Lines (J) Answers

Use the number lines to calculate each difference.

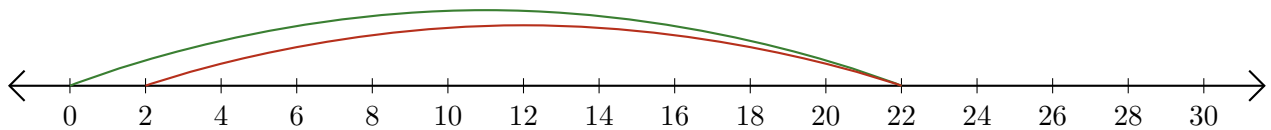
1.  $30 - 26 = \underline{4}$



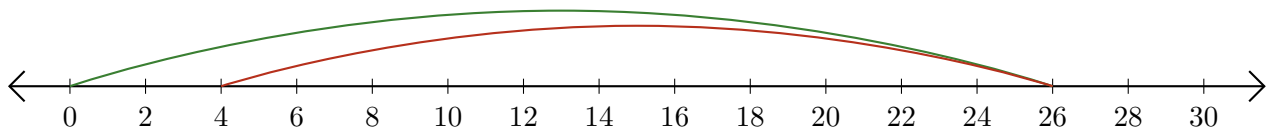
2.  $22 - 16 = \underline{6}$



3.  $22 - 20 = \underline{2}$



4.  $26 - 22 = \underline{4}$



5.  $30 - 18 = \underline{12}$

