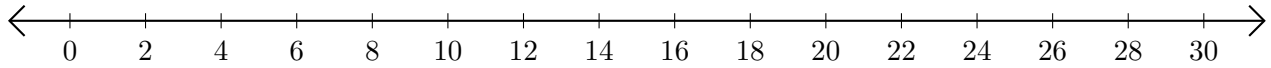


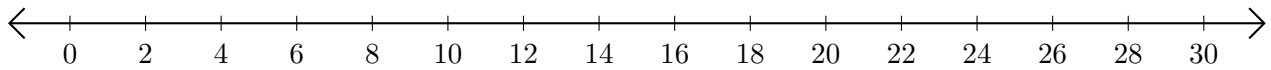
Subtracting on Number Lines (J)

Use the number lines to calculate each difference.

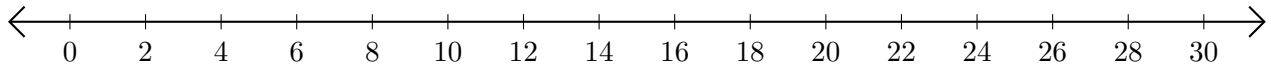
1. $30 - 26 = \underline{\quad}$



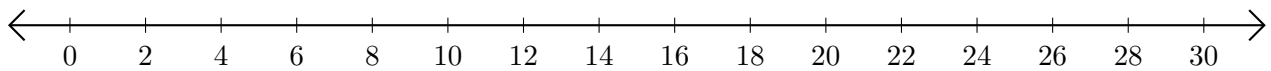
2. $22 - 16 = \underline{\quad}$



3. $22 - 20 = \underline{\quad}$



4. $26 - 22 = \underline{\quad}$



5. $30 - 18 = \underline{\quad}$

