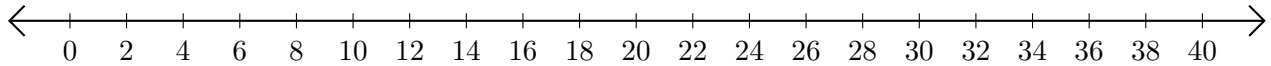


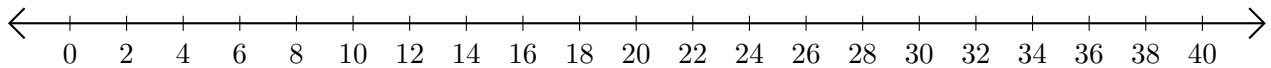
Subtracting on Number Lines (A)

Use the number lines to calculate each difference.

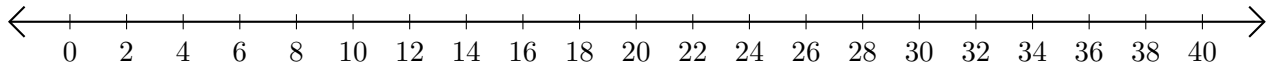
1. $18 - 14 = \underline{\quad}$



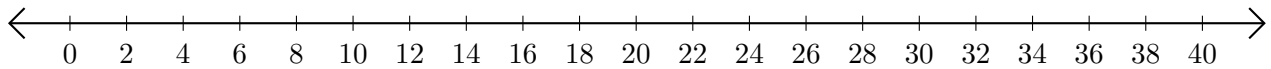
2. $30 - 6 = \underline{\quad}$



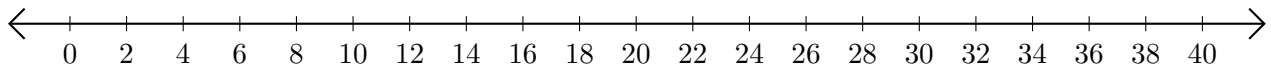
3. $20 - 2 = \underline{\quad}$



4. $18 - 4 = \underline{\quad}$



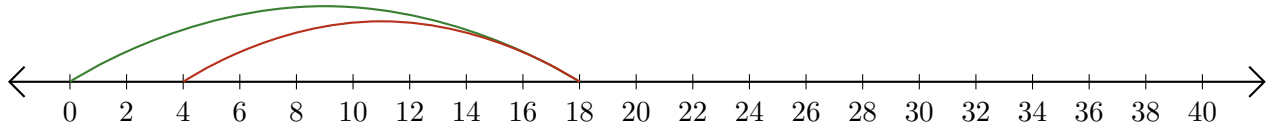
5. $36 - 22 = \underline{\quad}$



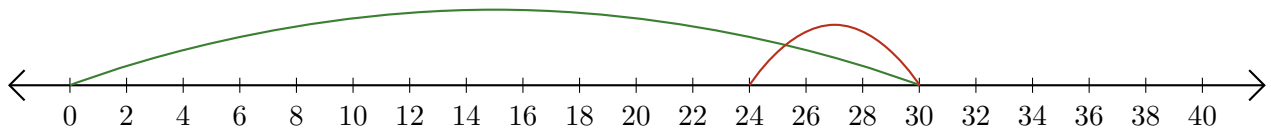
Subtracting on Number Lines (A) Answers

Use the number lines to calculate each difference.

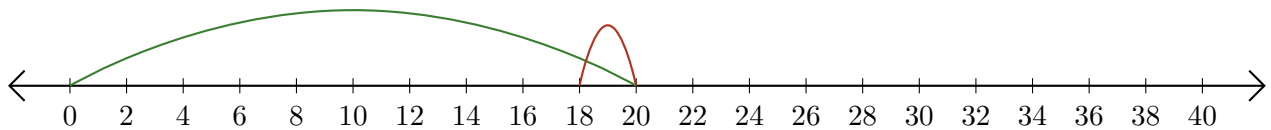
1. $18 - 14 = \underline{4}$



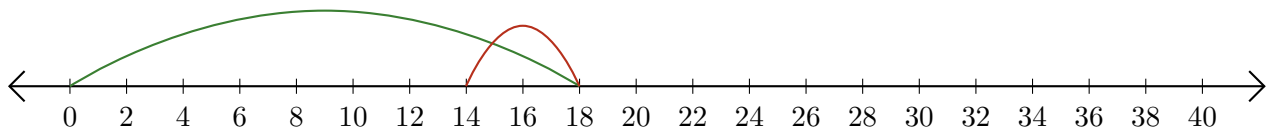
2. $30 - 6 = \underline{24}$



3. $20 - 2 = \underline{18}$



4. $18 - 4 = \underline{14}$



5. $36 - 22 = \underline{14}$

