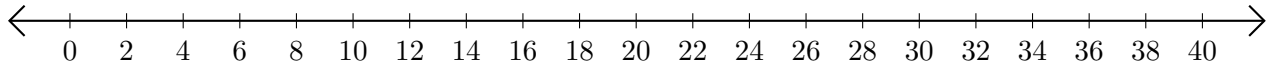


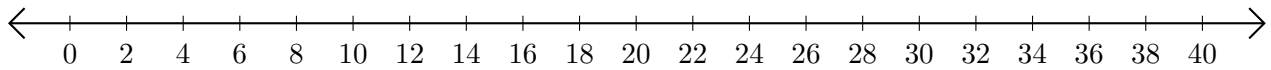
## Subtracting on Number Lines (B)

Use the number lines to calculate each difference.

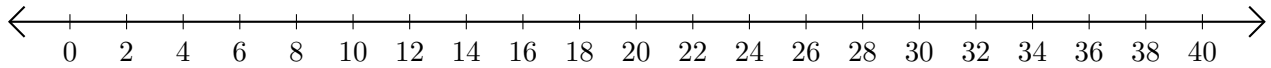
1.  $32 - 8 = \underline{\quad}$



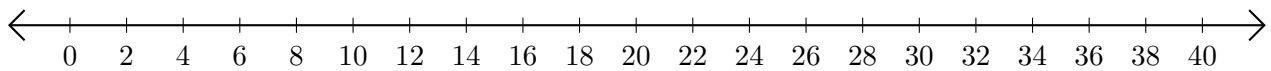
2.  $40 - 26 = \underline{\quad}$



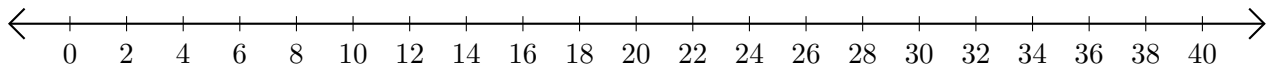
3.  $30 - 18 = \underline{\quad}$



4.  $32 - 12 = \underline{\quad}$



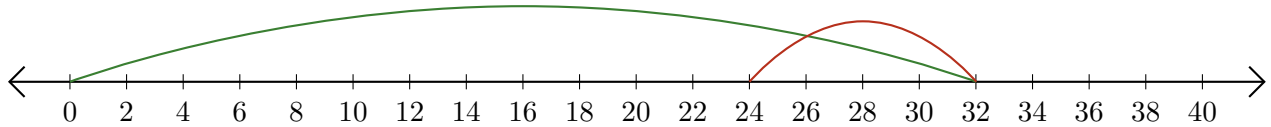
5.  $40 - 38 = \underline{\quad}$



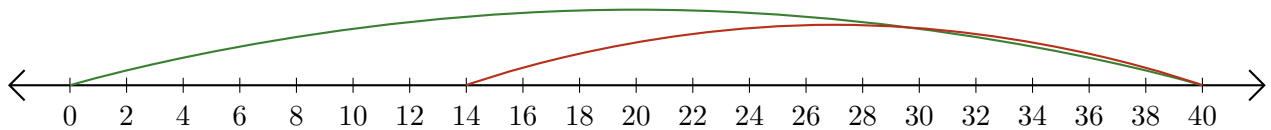
# Subtracting on Number Lines (B) Answers

Use the number lines to calculate each difference.

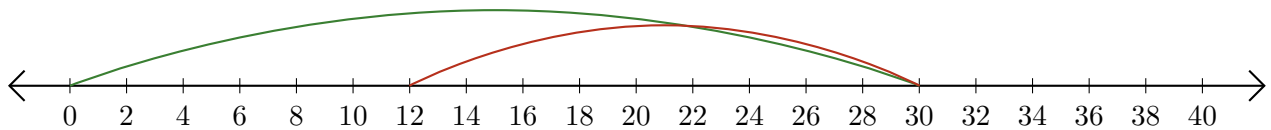
1.  $32 - 8 = \underline{24}$



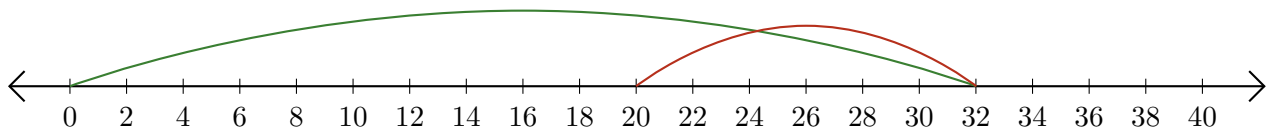
2.  $40 - 26 = \underline{14}$



3.  $30 - 18 = \underline{12}$



4.  $32 - 12 = \underline{20}$



5.  $40 - 38 = \underline{2}$

