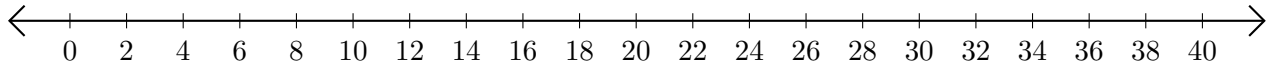


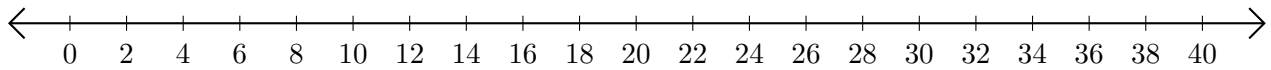
Subtracting on Number Lines (B)

Use the number lines to calculate each difference.

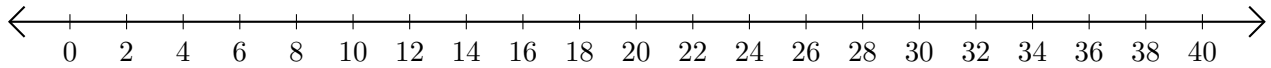
1. $32 - 8 = \underline{\quad}$



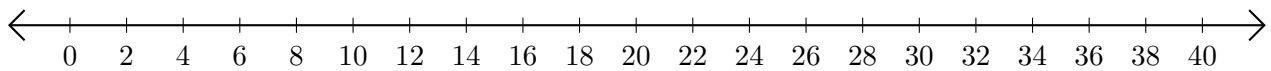
2. $40 - 26 = \underline{\quad}$



3. $30 - 18 = \underline{\quad}$



4. $32 - 12 = \underline{\quad}$



5. $40 - 38 = \underline{\quad}$

