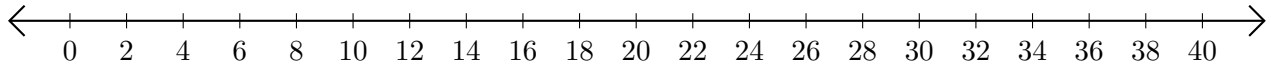


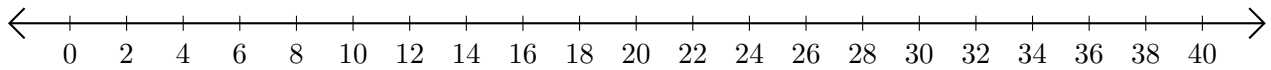
Subtracting on Number Lines (C)

Use the number lines to calculate each difference.

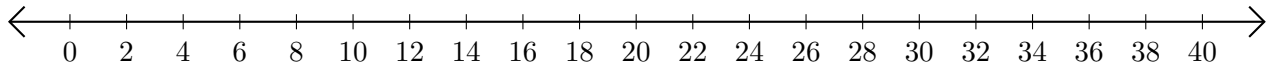
1. $26 - 4 = \underline{\quad}$



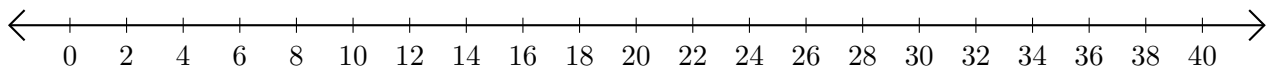
2. $22 - 12 = \underline{\quad}$



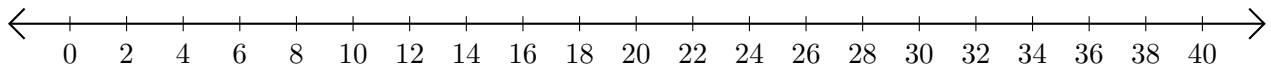
3. $38 - 32 = \underline{\quad}$



4. $26 - 8 = \underline{\quad}$



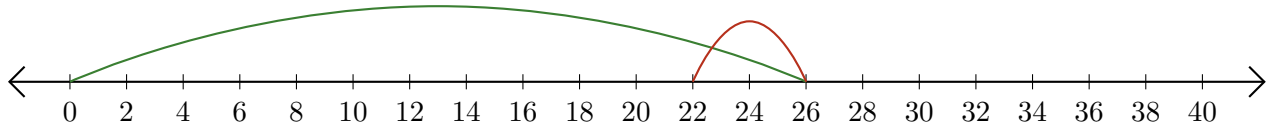
5. $38 - 26 = \underline{\quad}$



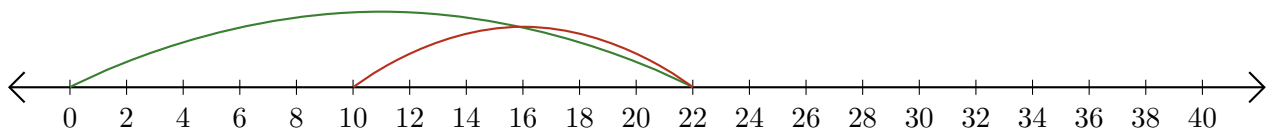
Subtracting on Number Lines (C) Answers

Use the number lines to calculate each difference.

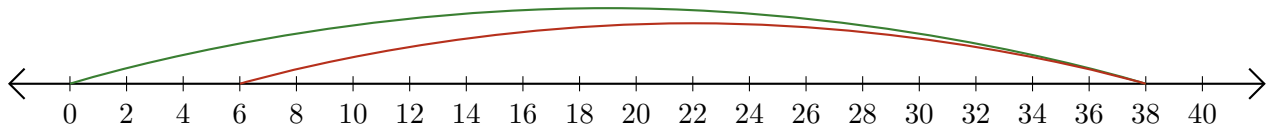
1. $26 - 4 = \underline{22}$



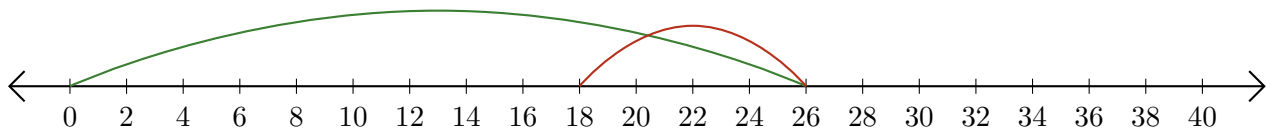
2. $22 - 12 = \underline{10}$



3. $38 - 32 = \underline{6}$



4. $26 - 8 = \underline{18}$



5. $38 - 26 = \underline{12}$

