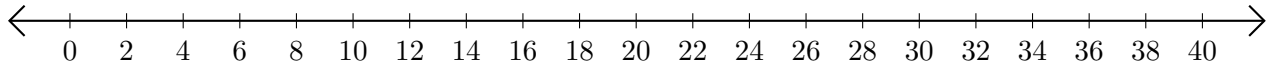


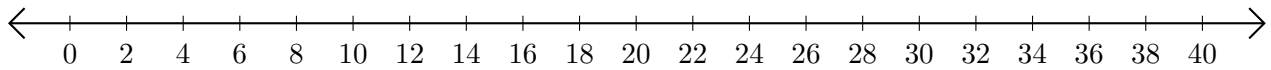
# Subtracting on Number Lines (D)

Use the number lines to calculate each difference.

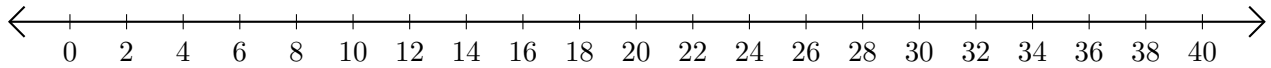
1.  $34 - 22 = \underline{\quad}$



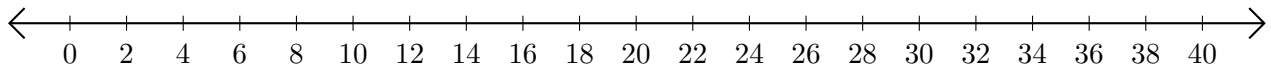
2.  $38 - 26 = \underline{\quad}$



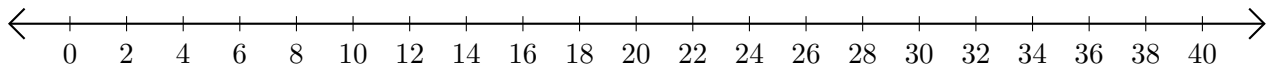
3.  $40 - 34 = \underline{\quad}$



4.  $36 - 28 = \underline{\quad}$



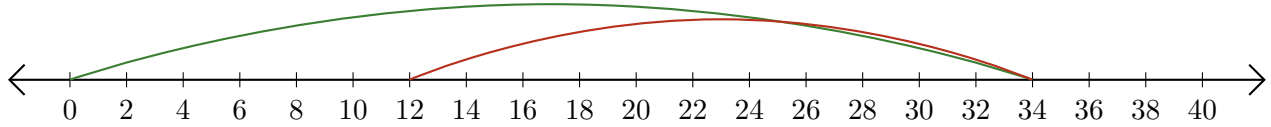
5.  $40 - 32 = \underline{\quad}$



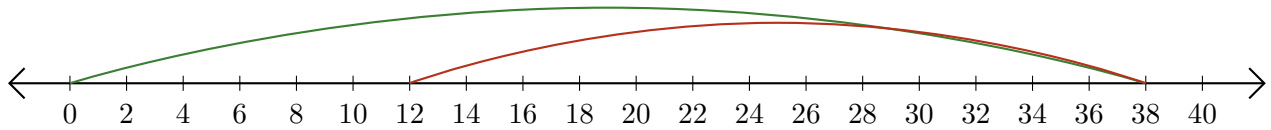
# Subtracting on Number Lines (D) Answers

Use the number lines to calculate each difference.

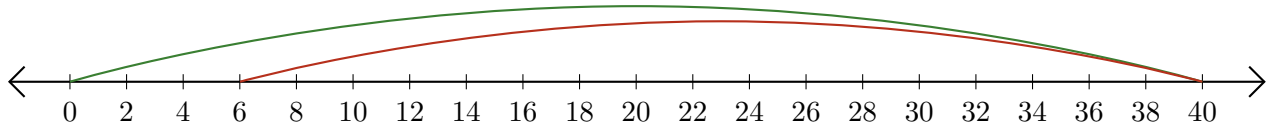
1.  $34 - 22 = \underline{12}$



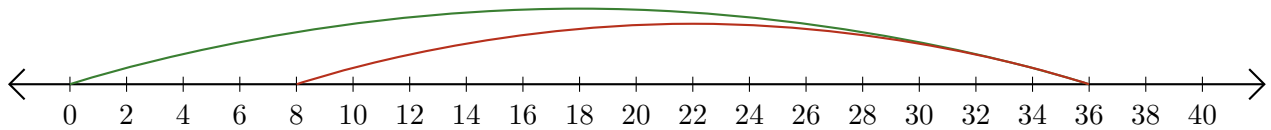
2.  $38 - 26 = \underline{12}$



3.  $40 - 34 = \underline{6}$



4.  $36 - 28 = \underline{8}$



5.  $40 - 32 = \underline{8}$

