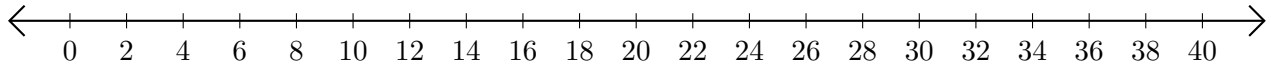


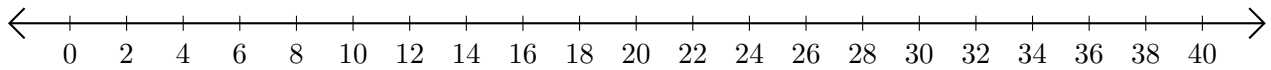
Subtracting on Number Lines (D)

Use the number lines to calculate each difference.

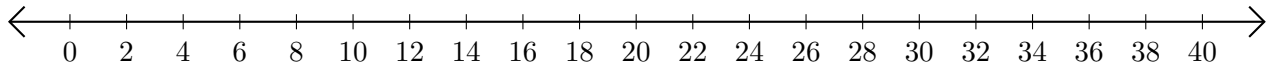
1. $34 - 22 = \underline{\quad}$



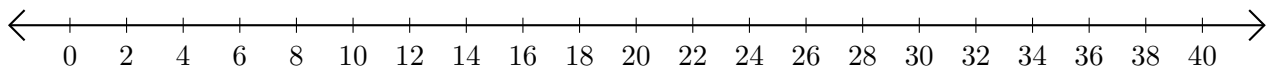
2. $38 - 26 = \underline{\quad}$



3. $40 - 34 = \underline{\quad}$



4. $36 - 28 = \underline{\quad}$



5. $40 - 32 = \underline{\quad}$

