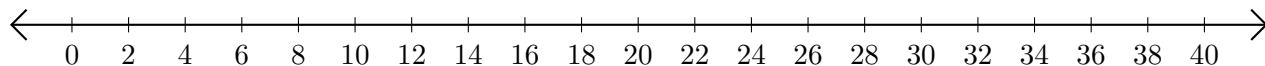


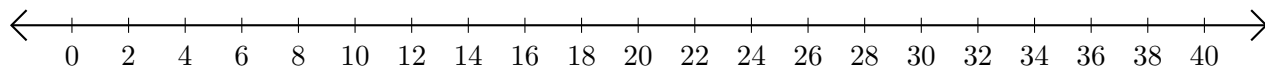
Subtracting on Number Lines (F)

Use the number lines to calculate each difference.

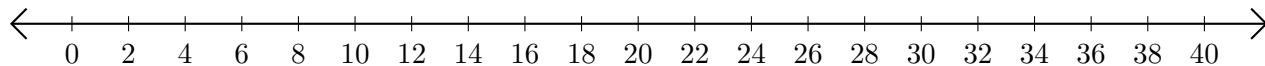
1. $40 - 34 = \underline{\quad}$



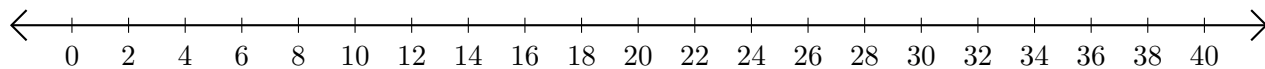
2. $38 - 20 = \underline{\quad}$



3. $38 - 24 = \underline{\quad}$



4. $30 - 10 = \underline{\quad}$



5. $18 - 16 = \underline{\quad}$

