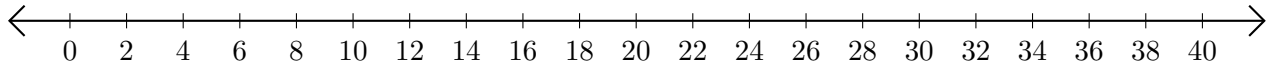


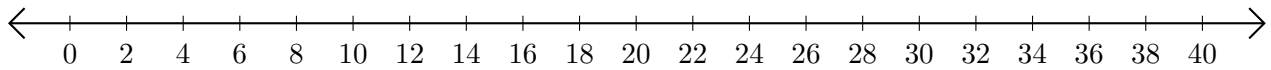
Subtracting on Number Lines (H)

Use the number lines to calculate each difference.

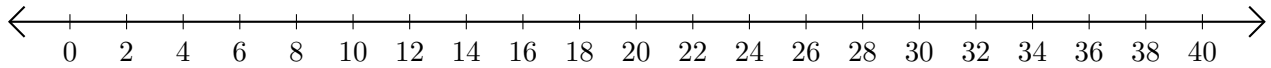
1. $40 - 38 = \underline{\quad}$



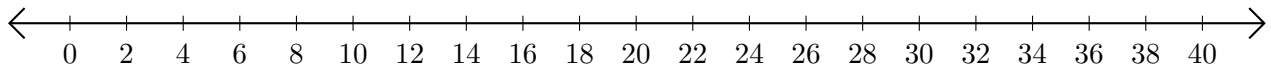
2. $36 - 28 = \underline{\quad}$



3. $30 - 26 = \underline{\quad}$



4. $36 - 10 = \underline{\quad}$



5. $28 - 24 = \underline{\quad}$

