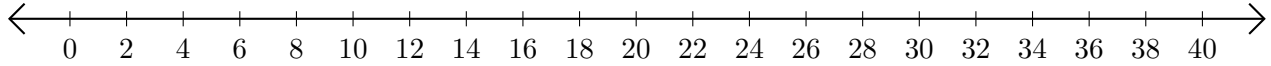


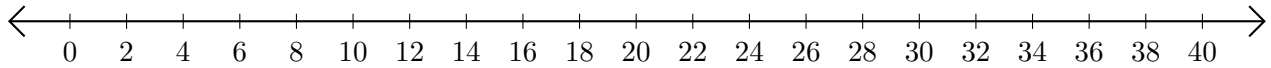
Subtracting on Number Lines (J)

Use the number lines to calculate each difference.

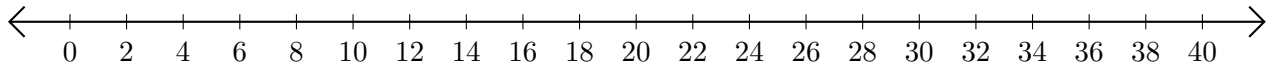
1. $40 - 32 = \underline{\quad}$



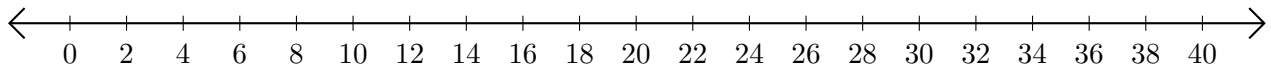
2. $28 - 22 = \underline{\quad}$



3. $36 - 28 = \underline{\quad}$



4. $32 - 16 = \underline{\quad}$



5. $12 - 4 = \underline{\quad}$

