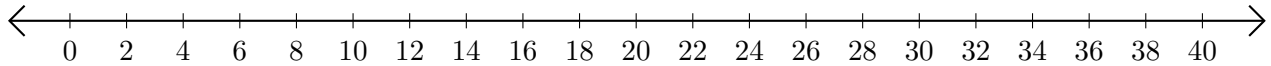


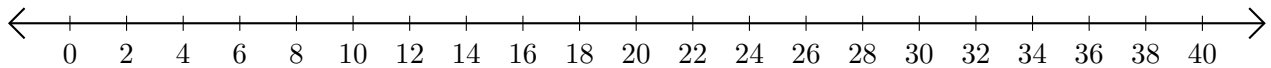
Subtracting on Number Lines (A)

Use the number lines to calculate each difference.

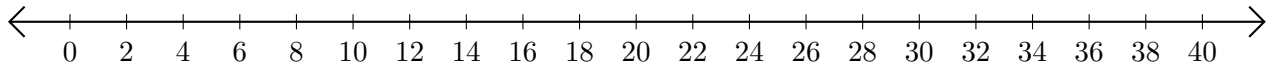
1. $18 - 14 = \underline{\quad}$



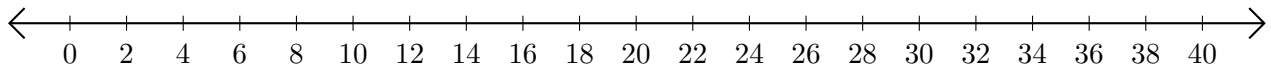
2. $30 - 6 = \underline{\quad}$



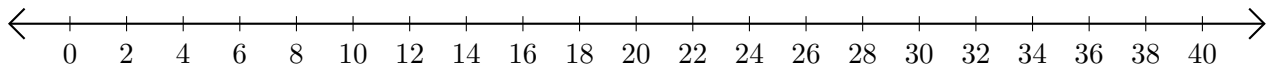
3. $20 - 2 = \underline{\quad}$



4. $18 - 4 = \underline{\quad}$



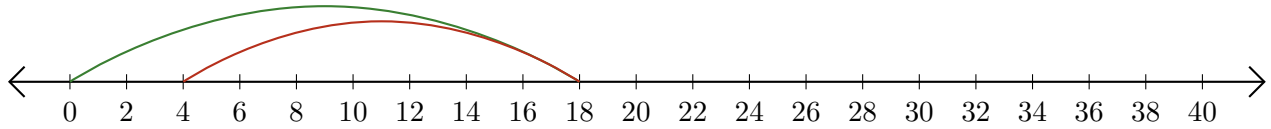
5. $36 - 22 = \underline{\quad}$



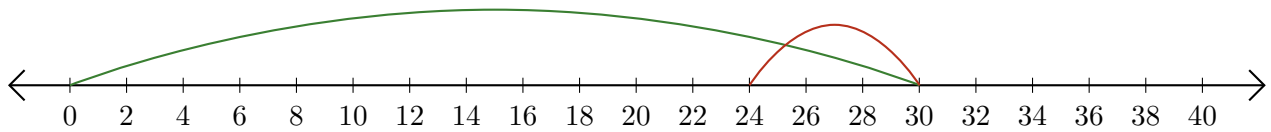
Subtracting on Number Lines (A) Answers

Use the number lines to calculate each difference.

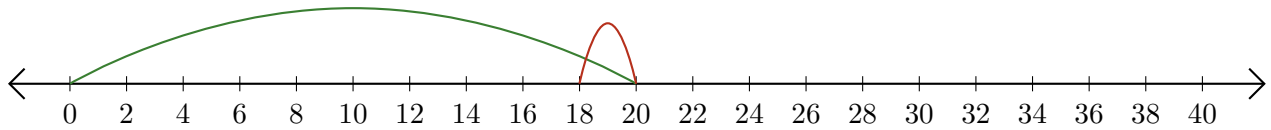
1. $18 - 14 = \underline{4}$



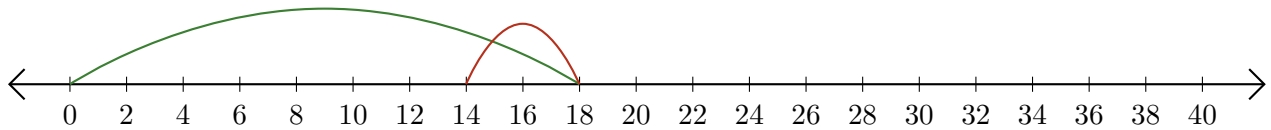
2. $30 - 6 = \underline{24}$



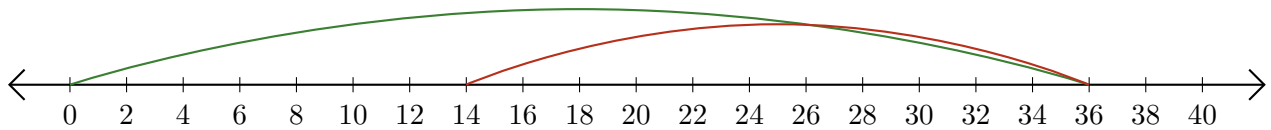
3. $20 - 2 = \underline{18}$



4. $18 - 4 = \underline{14}$



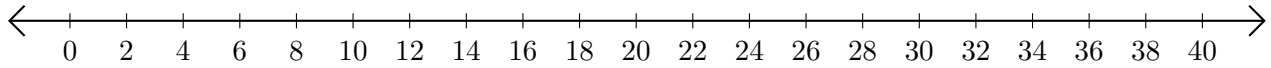
5. $36 - 22 = \underline{14}$



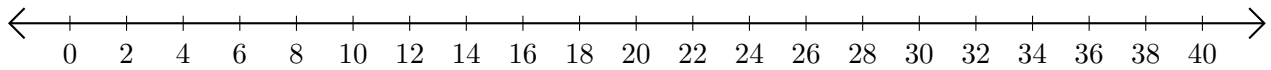
Subtracting on Number Lines (B)

Use the number lines to calculate each difference.

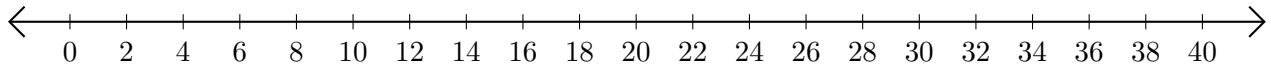
1. $32 - 8 = \underline{\quad}$



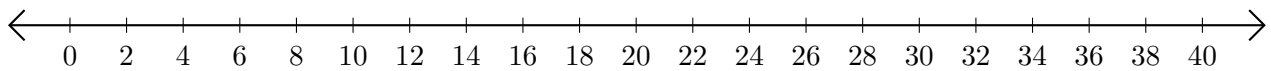
2. $40 - 26 = \underline{\quad}$



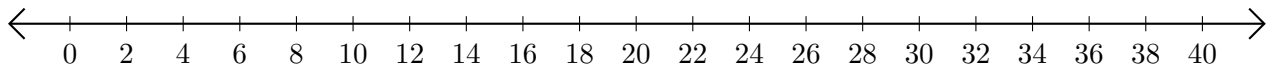
3. $30 - 18 = \underline{\quad}$



4. $32 - 12 = \underline{\quad}$



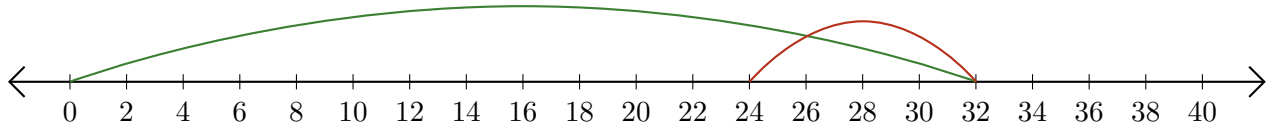
5. $40 - 38 = \underline{\quad}$



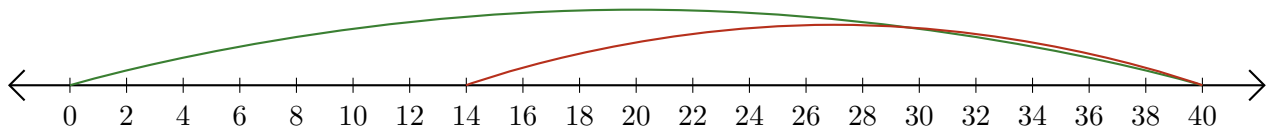
Subtracting on Number Lines (B) Answers

Use the number lines to calculate each difference.

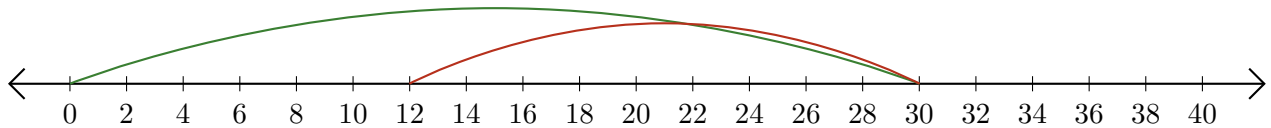
1. $32 - 8 = \underline{24}$



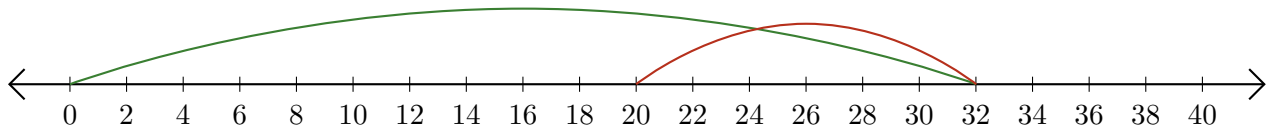
2. $40 - 26 = \underline{14}$



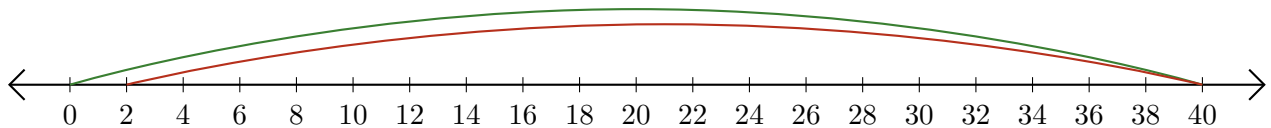
3. $30 - 18 = \underline{12}$



4. $32 - 12 = \underline{20}$



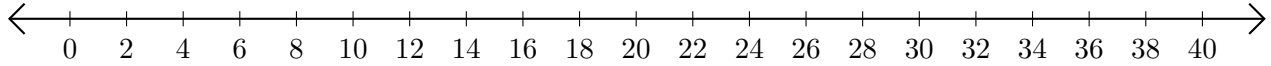
5. $40 - 38 = \underline{2}$



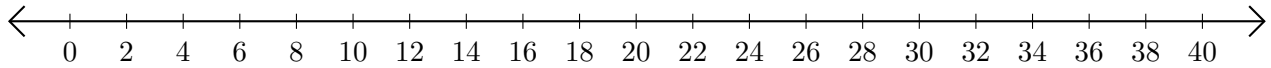
Subtracting on Number Lines (C)

Use the number lines to calculate each difference.

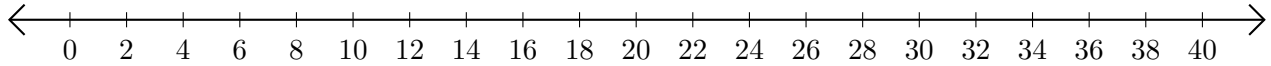
1. $26 - 4 = \underline{\quad}$



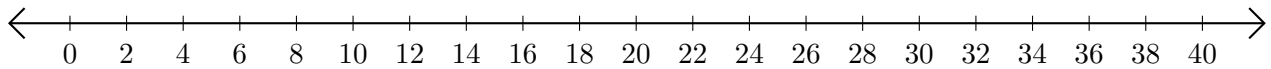
2. $22 - 12 = \underline{\quad}$



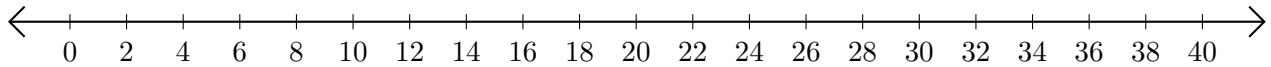
3. $38 - 32 = \underline{\quad}$



4. $26 - 8 = \underline{\quad}$



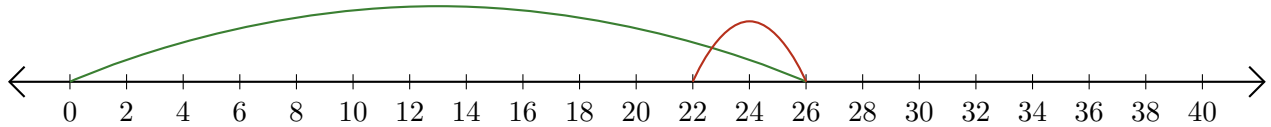
5. $38 - 26 = \underline{\quad}$



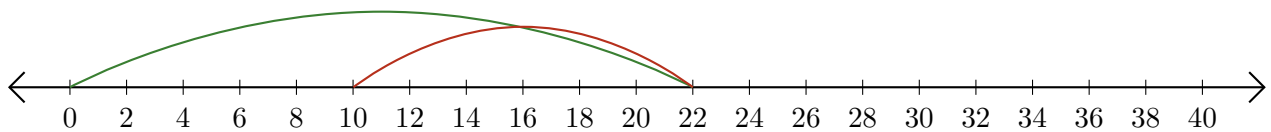
Subtracting on Number Lines (C) Answers

Use the number lines to calculate each difference.

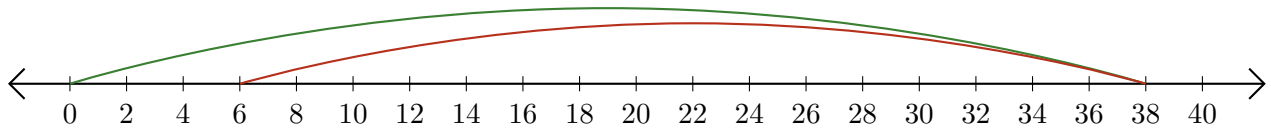
1. $26 - 4 = \underline{22}$



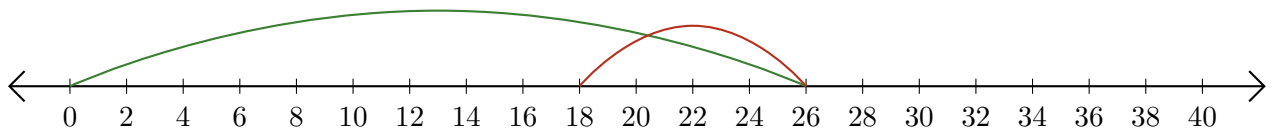
2. $22 - 12 = \underline{10}$



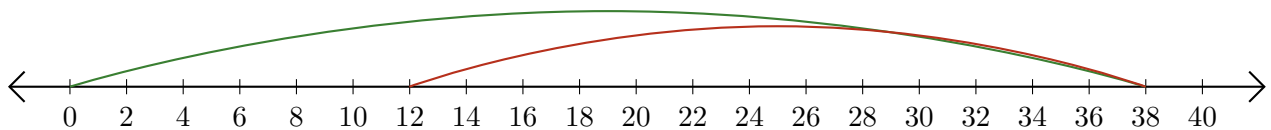
3. $38 - 32 = \underline{6}$



4. $26 - 8 = \underline{18}$



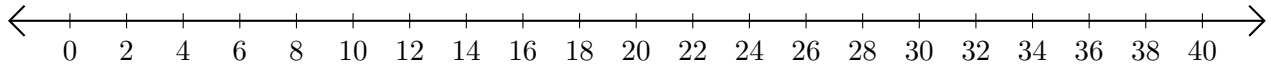
5. $38 - 26 = \underline{12}$



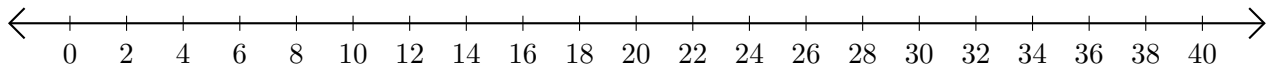
Subtracting on Number Lines (D)

Use the number lines to calculate each difference.

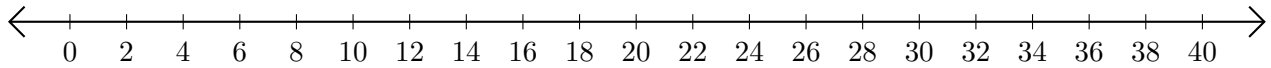
1. $34 - 22 = \underline{\quad}$



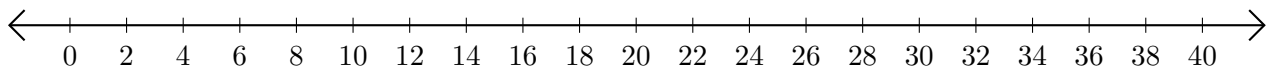
2. $38 - 26 = \underline{\quad}$



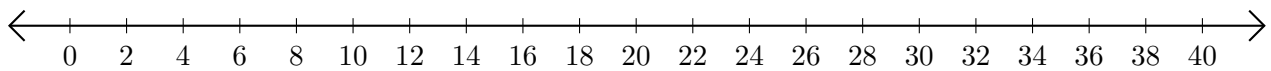
3. $40 - 34 = \underline{\quad}$



4. $36 - 28 = \underline{\quad}$



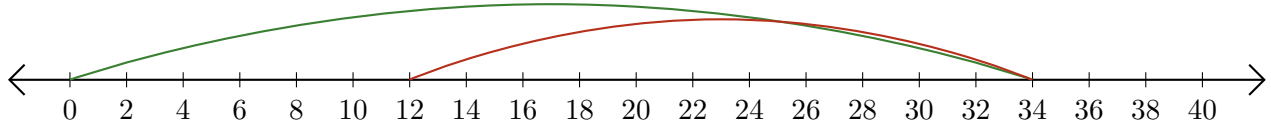
5. $40 - 32 = \underline{\quad}$



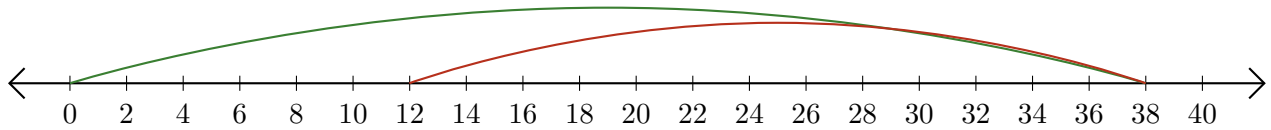
Subtracting on Number Lines (D) Answers

Use the number lines to calculate each difference.

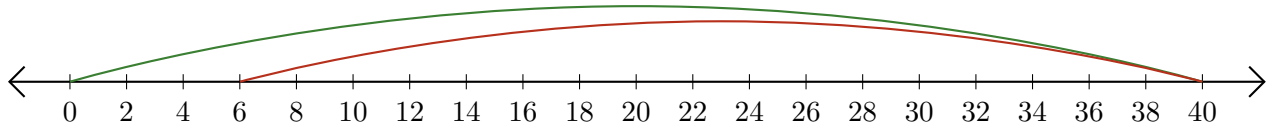
1. $34 - 22 = \underline{12}$



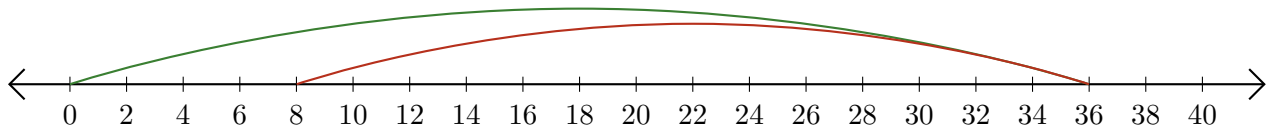
2. $38 - 26 = \underline{12}$



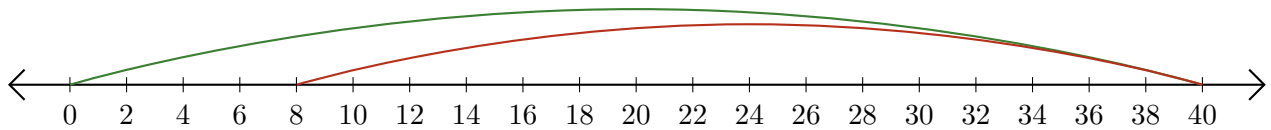
3. $40 - 34 = \underline{6}$



4. $36 - 28 = \underline{8}$



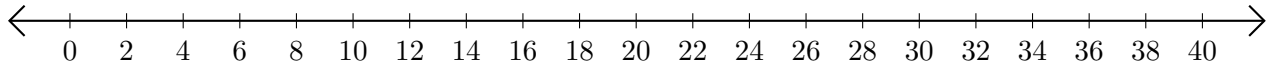
5. $40 - 32 = \underline{8}$



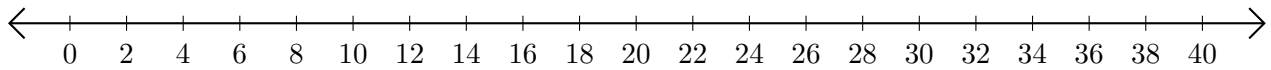
Subtracting on Number Lines (E)

Use the number lines to calculate each difference.

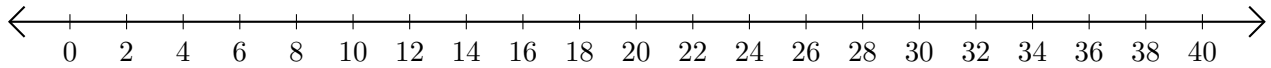
1. $38 - 30 = \underline{\quad}$



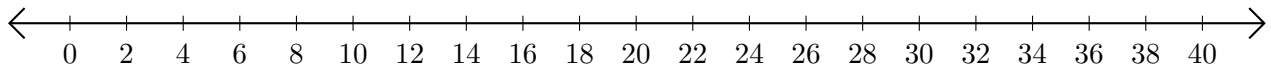
2. $40 - 4 = \underline{\quad}$



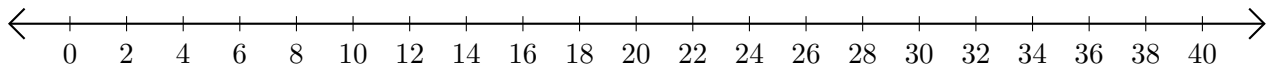
3. $34 - 28 = \underline{\quad}$



4. $8 - 6 = \underline{\quad}$



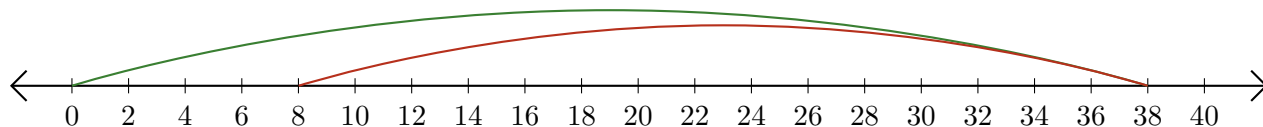
5. $28 - 12 = \underline{\quad}$



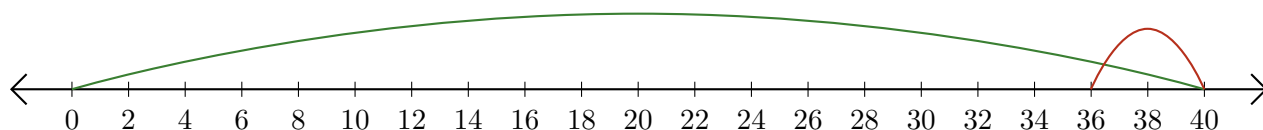
Subtracting on Number Lines (E) Answers

Use the number lines to calculate each difference.

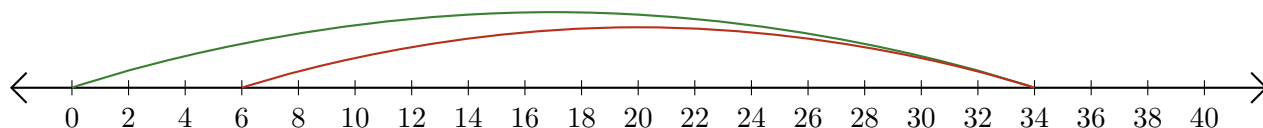
1. $38 - 30 = \underline{8}$



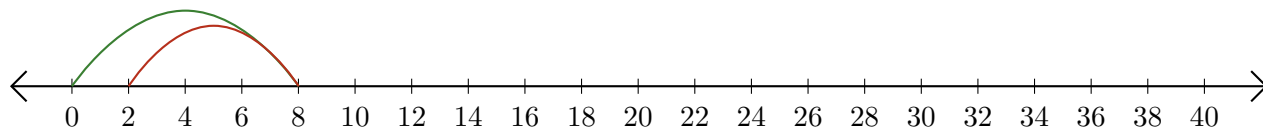
2. $40 - 4 = \underline{36}$



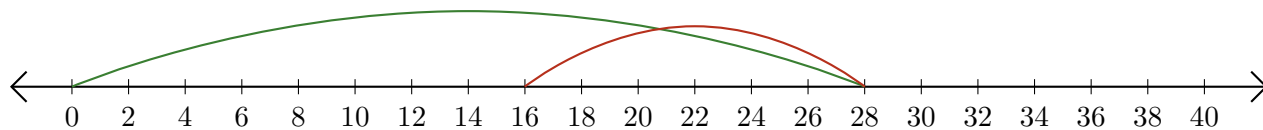
3. $34 - 28 = \underline{6}$



4. $8 - 6 = \underline{2}$



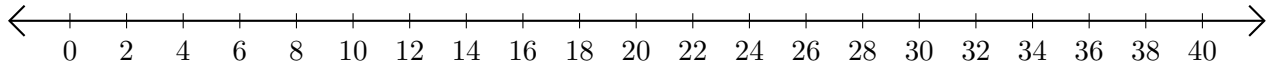
5. $28 - 12 = \underline{16}$



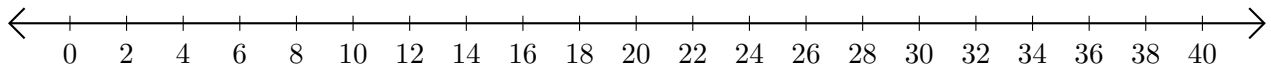
Subtracting on Number Lines (F)

Use the number lines to calculate each difference.

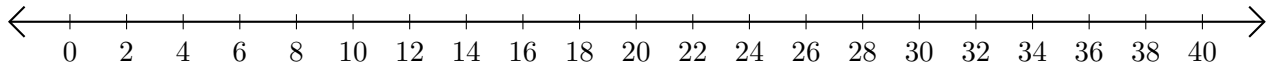
1. $40 - 34 = \underline{\quad}$



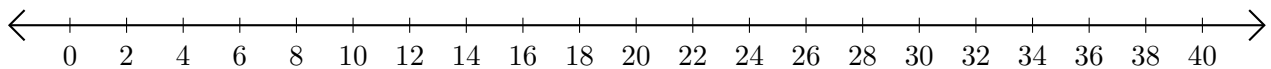
2. $38 - 20 = \underline{\quad}$



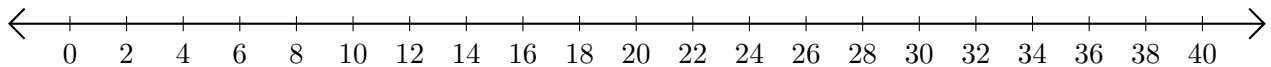
3. $38 - 24 = \underline{\quad}$



4. $30 - 10 = \underline{\quad}$



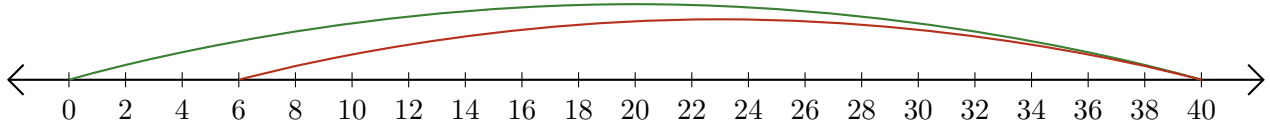
5. $18 - 16 = \underline{\quad}$



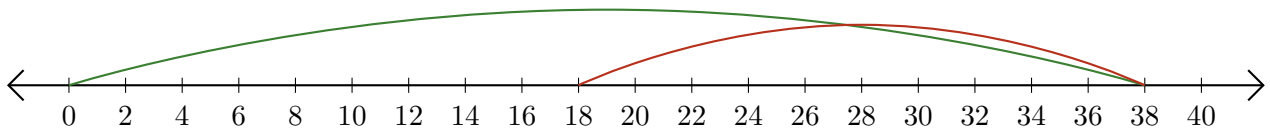
Subtracting on Number Lines (F) Answers

Use the number lines to calculate each difference.

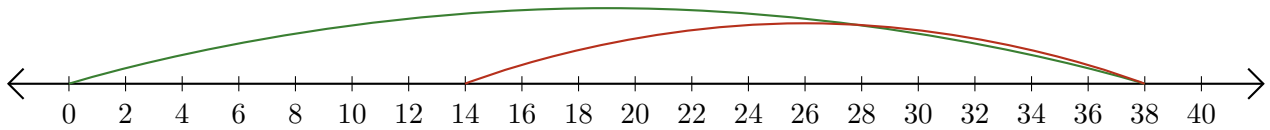
1. $40 - 34 = \underline{6}$



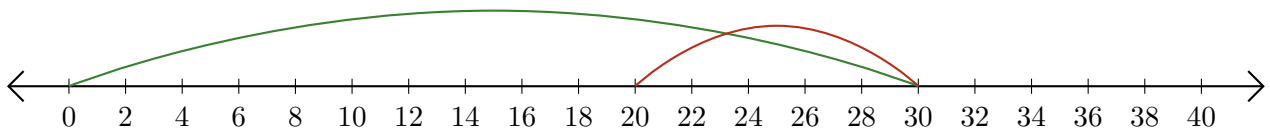
2. $38 - 20 = \underline{18}$



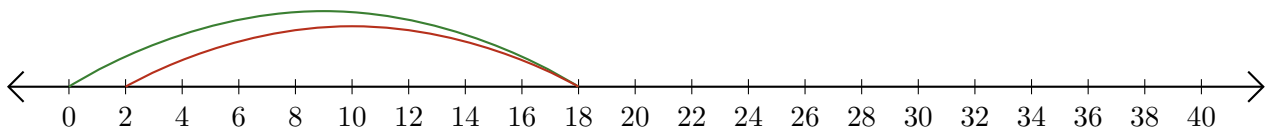
3. $38 - 24 = \underline{14}$



4. $30 - 10 = \underline{20}$



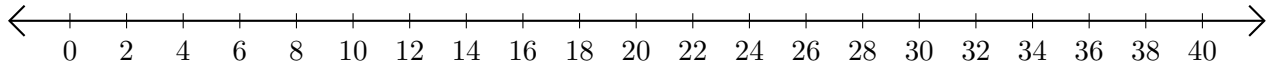
5. $18 - 16 = \underline{2}$



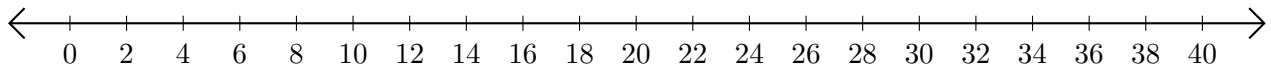
Subtracting on Number Lines (G)

Use the number lines to calculate each difference.

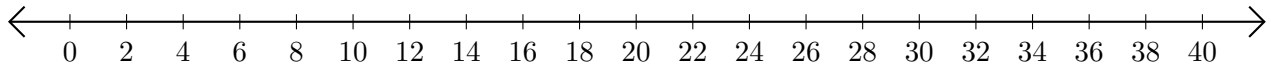
1. $18 - 2 = \underline{\quad}$



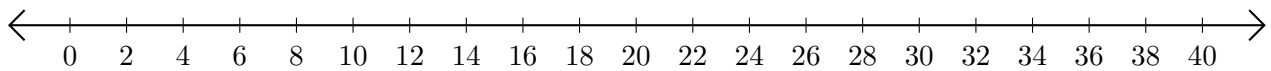
2. $10 - 8 = \underline{\quad}$



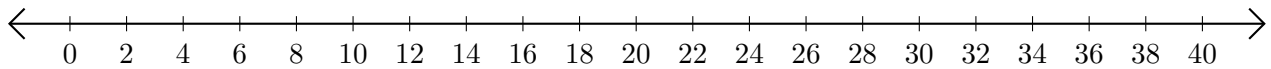
3. $38 - 34 = \underline{\quad}$



4. $40 - 36 = \underline{\quad}$



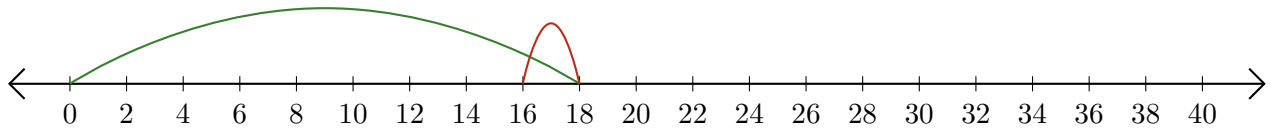
5. $38 - 30 = \underline{\quad}$




Subtracting on Number Lines (G) Answers

Use the number lines to calculate each difference.

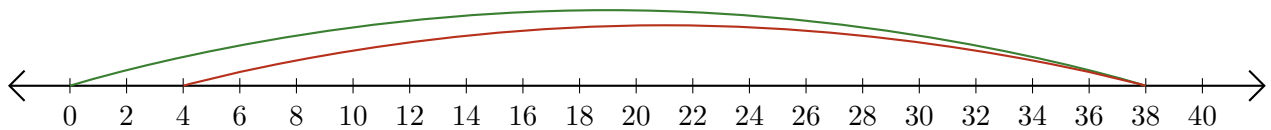
1. $18 - 2 = \underline{16}$



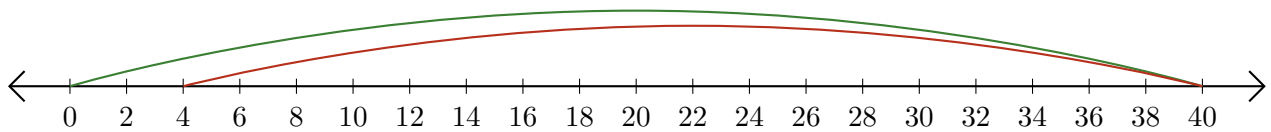
2. $10 - 8 = \underline{2}$



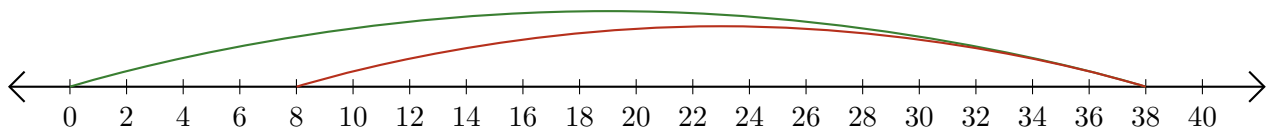
3. $38 - 34 = \underline{4}$



4. $40 - 36 = \underline{4}$



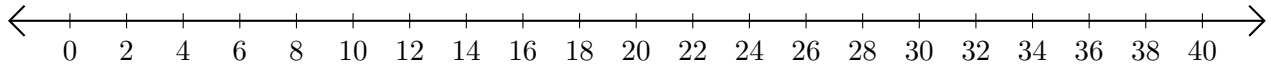
5. $38 - 30 = \underline{8}$



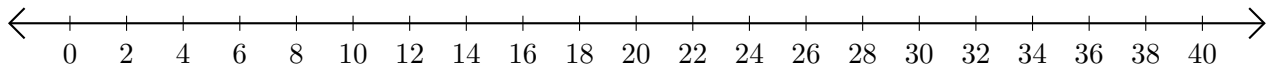
Subtracting on Number Lines (H)

Use the number lines to calculate each difference.

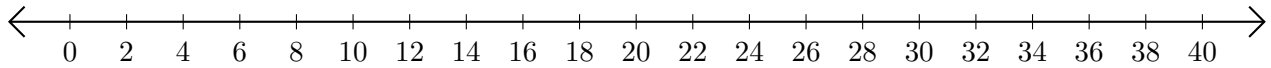
1. $40 - 38 = \underline{\quad}$



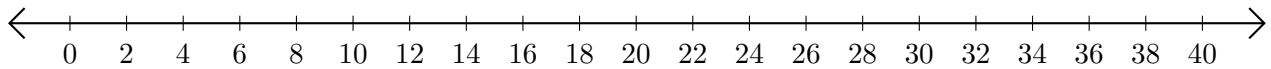
2. $36 - 28 = \underline{\quad}$



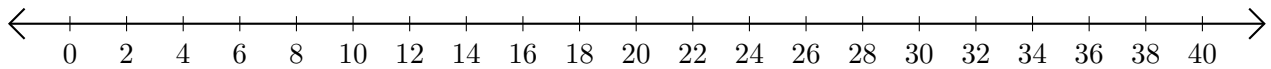
3. $30 - 26 = \underline{\quad}$



4. $36 - 10 = \underline{\quad}$



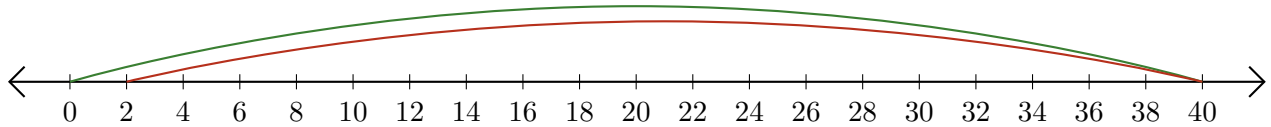
5. $28 - 24 = \underline{\quad}$



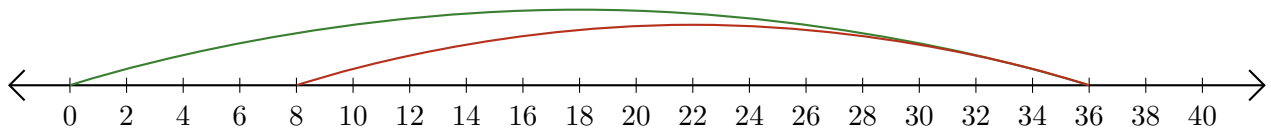
Subtracting on Number Lines (H) Answers

Use the number lines to calculate each difference.

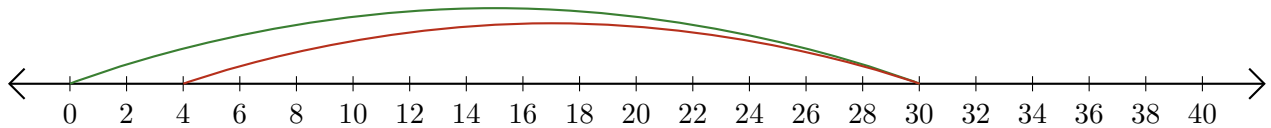
1. $40 - 38 = \underline{2}$



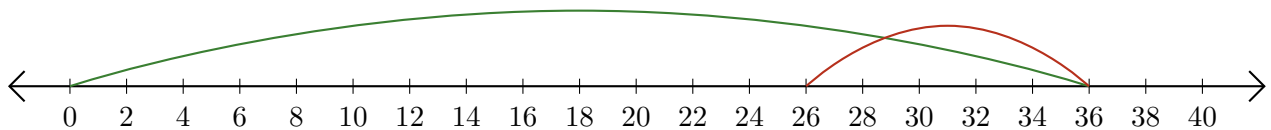
2. $36 - 28 = \underline{8}$



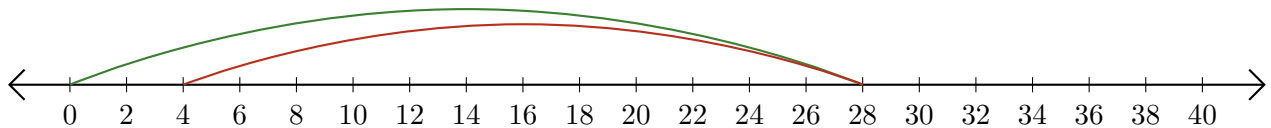
3. $30 - 26 = \underline{4}$



4. $36 - 10 = \underline{26}$



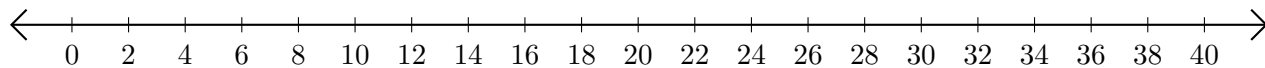
5. $28 - 24 = \underline{4}$



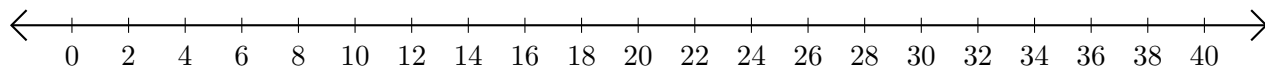
Subtracting on Number Lines (I)

Use the number lines to calculate each difference.

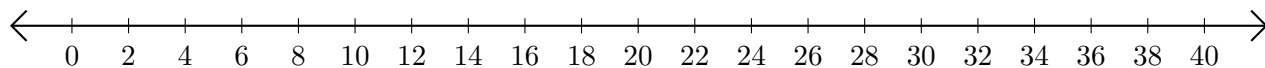
1. $28 - 22 = \underline{\quad}$



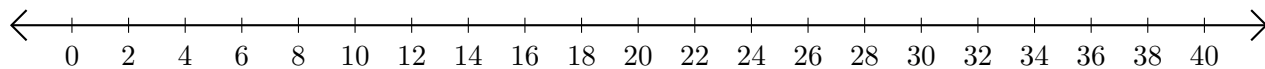
2. $32 - 2 = \underline{\quad}$



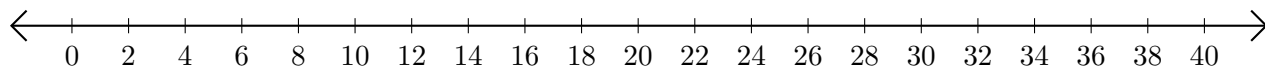
3. $36 - 16 = \underline{\quad}$



4. $38 - 36 = \underline{\quad}$



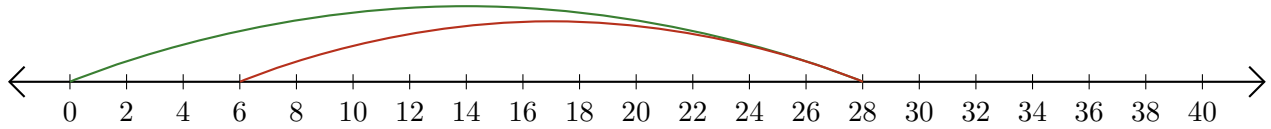
5. $22 - 12 = \underline{\quad}$



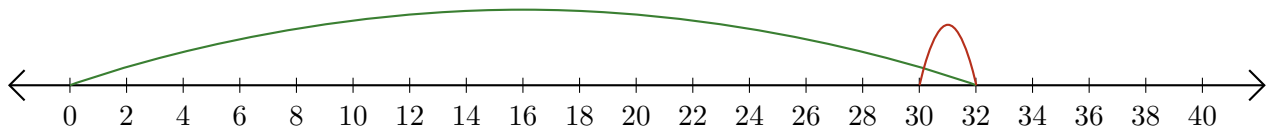
Subtracting on Number Lines (I) Answers

Use the number lines to calculate each difference.

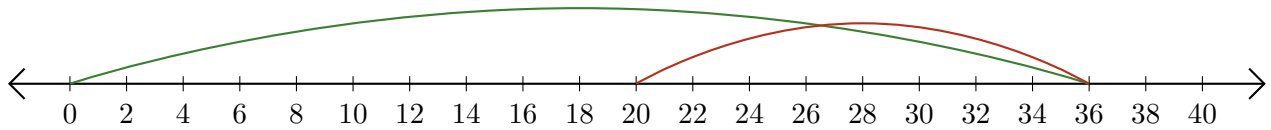
1. $28 - 22 = \underline{6}$



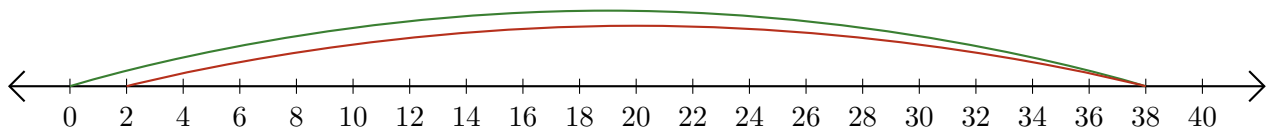
2. $32 - 2 = \underline{30}$



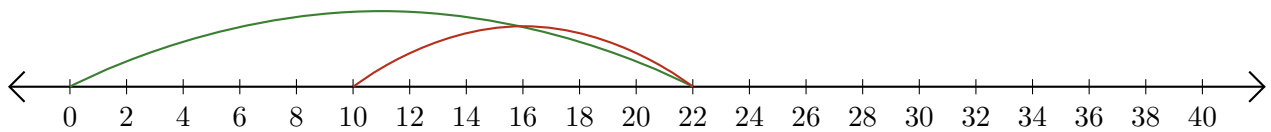
3. $36 - 16 = \underline{20}$



4. $38 - 36 = \underline{2}$



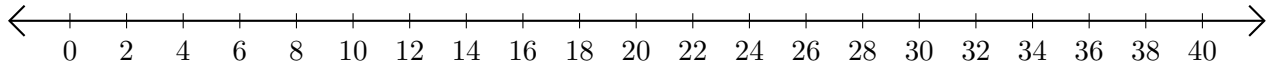
5. $22 - 12 = \underline{10}$



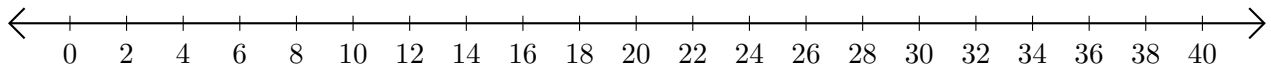
Subtracting on Number Lines (J)

Use the number lines to calculate each difference.

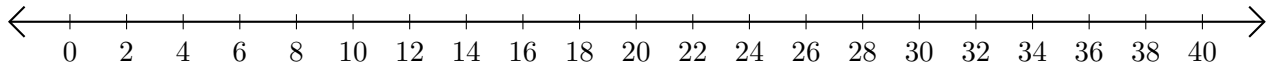
1. $40 - 32 = \underline{\quad}$



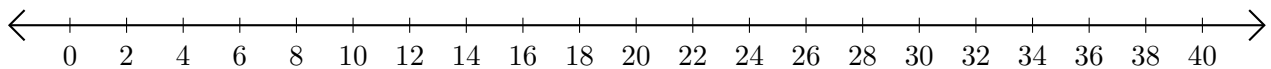
2. $28 - 22 = \underline{\quad}$



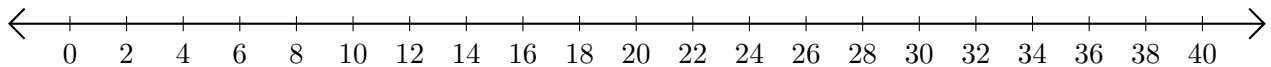
3. $36 - 28 = \underline{\quad}$



4. $32 - 16 = \underline{\quad}$



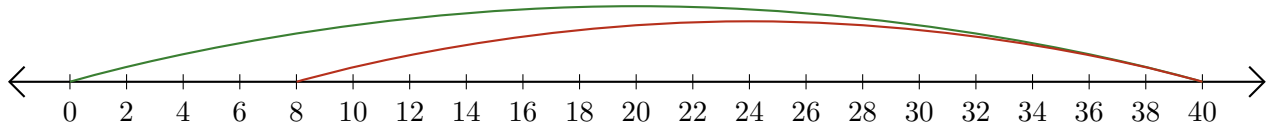
5. $12 - 4 = \underline{\quad}$



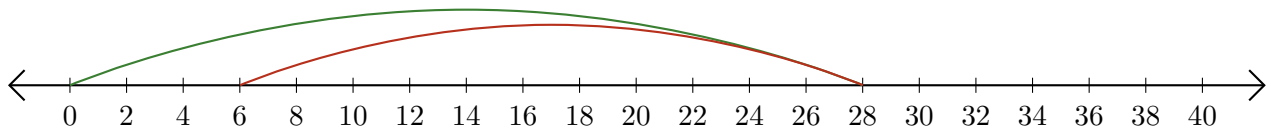
Subtracting on Number Lines (J) Answers

Use the number lines to calculate each difference.

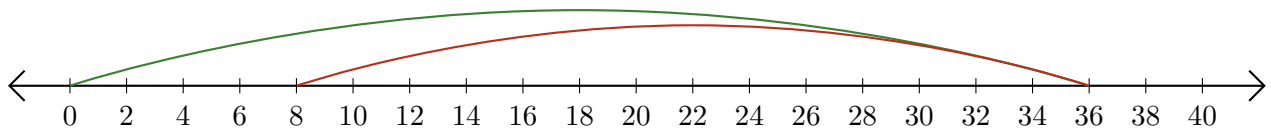
1. $40 - 32 = \underline{8}$



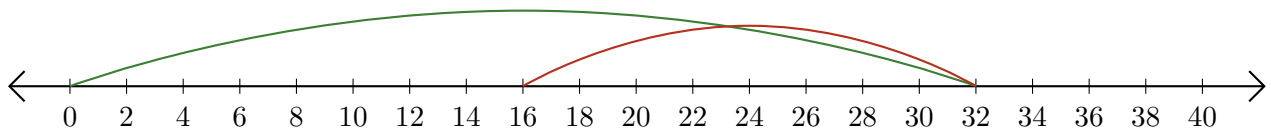
2. $28 - 22 = \underline{6}$



3. $36 - 28 = \underline{8}$



4. $32 - 16 = \underline{16}$



5. $12 - 4 = \underline{8}$

