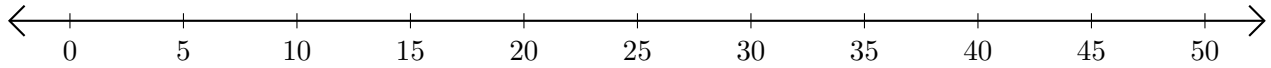


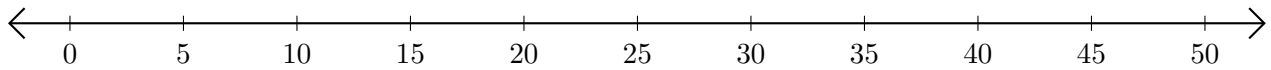
Subtracting on Number Lines (A)

Use the number lines to calculate each difference.

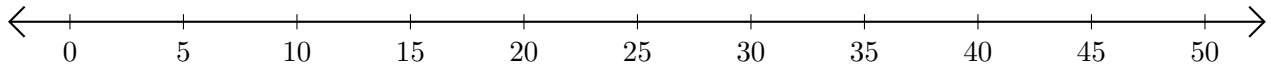
1. $50 - 30 = \underline{\quad}$



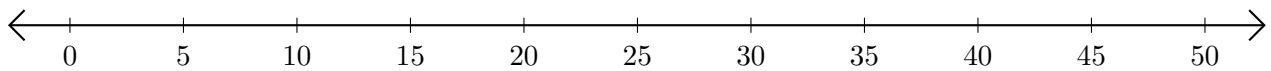
2. $40 - 15 = \underline{\quad}$



3. $40 - 35 = \underline{\quad}$



4. $45 - 10 = \underline{\quad}$



5. $30 - 20 = \underline{\quad}$

