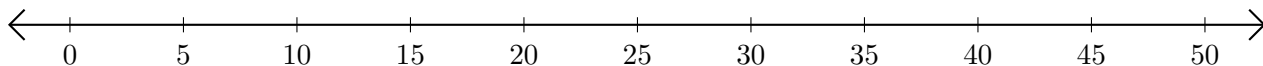


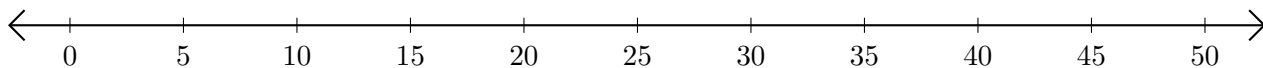
## Subtracting on Number Lines (B)

Use the number lines to calculate each difference.

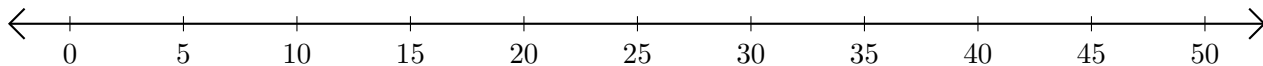
1.  $50 - 10 = \underline{\quad}$



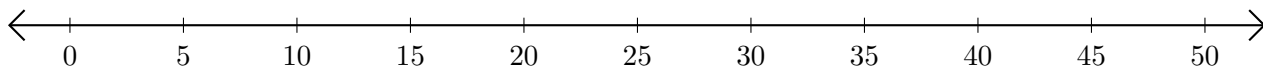
2.  $50 - 45 = \underline{\quad}$



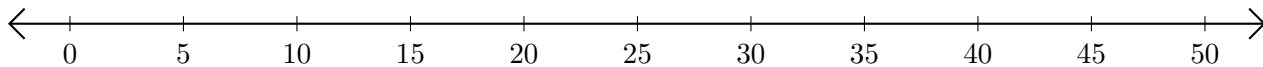
3.  $10 - 5 = \underline{\quad}$



4.  $45 - 35 = \underline{\quad}$



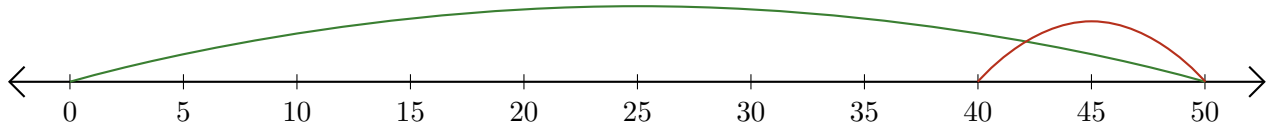
5.  $30 - 15 = \underline{\quad}$



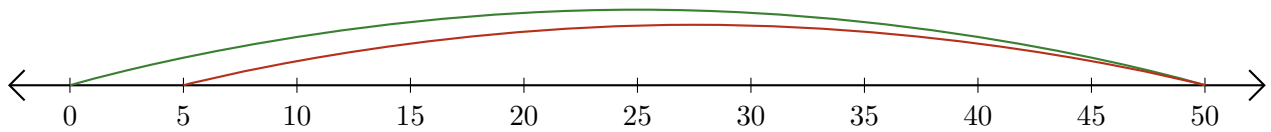
# Subtracting on Number Lines (B) Answers

Use the number lines to calculate each difference.

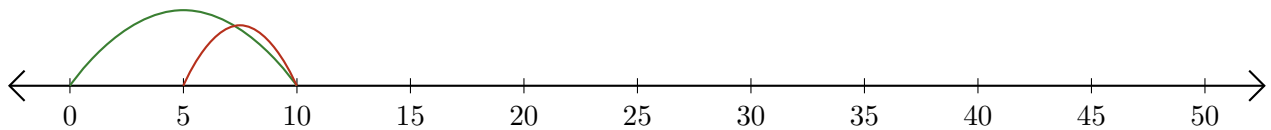
1.  $50 - 10 = \underline{40}$



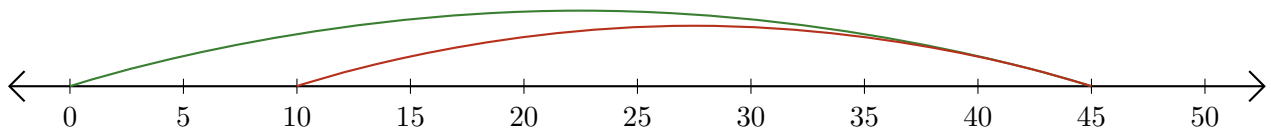
2.  $50 - 45 = \underline{5}$



3.  $10 - 5 = \underline{5}$



4.  $45 - 35 = \underline{10}$



5.  $30 - 15 = \underline{15}$

