

## Subtracting on Number Lines (D)

Use the number lines to calculate each difference.

1.  $50 - 45 = \underline{\quad}$



2.  $50 - 30 = \underline{\quad}$



3.  $40 - 25 = \underline{\quad}$



4.  $35 - 10 = \underline{\quad}$



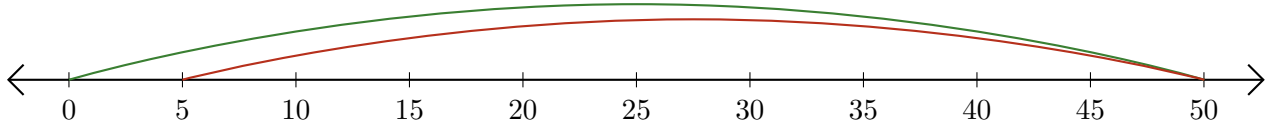
5.  $20 - 15 = \underline{\quad}$



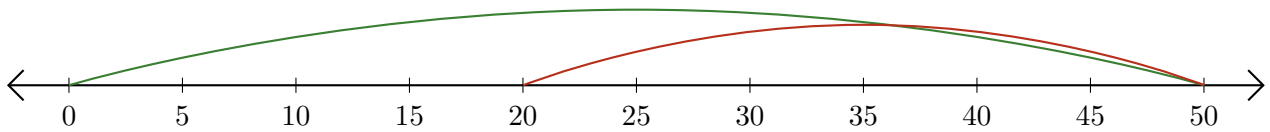
# Subtracting on Number Lines (D) Answers

Use the number lines to calculate each difference.

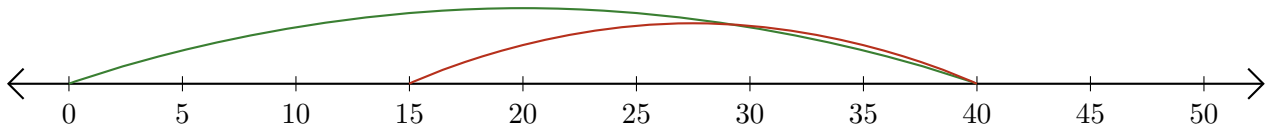
1.  $50 - 45 = \underline{5}$



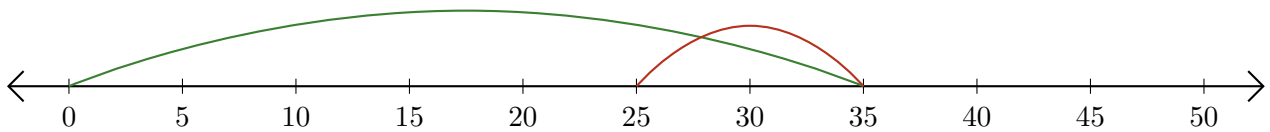
2.  $50 - 30 = \underline{20}$



3.  $40 - 25 = \underline{15}$



4.  $35 - 10 = \underline{25}$



5.  $20 - 15 = \underline{5}$

