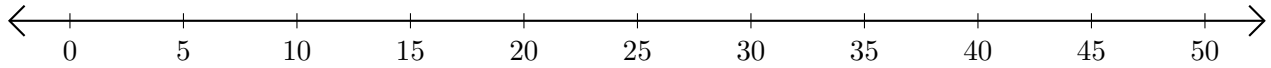


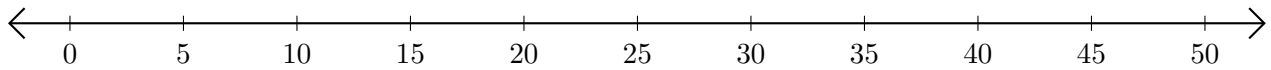
Subtracting on Number Lines (E)

Use the number lines to calculate each difference.

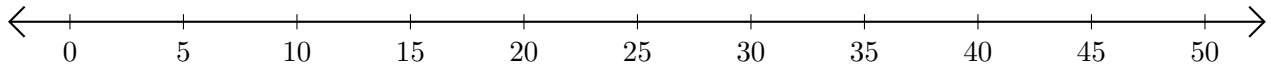
1. $10 - 5 = \underline{\quad}$



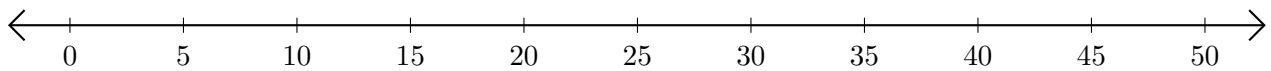
2. $45 - 25 = \underline{\quad}$



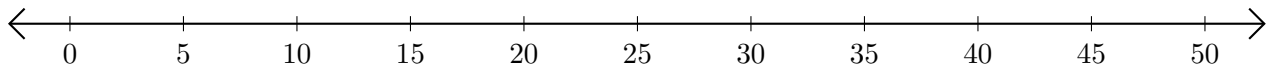
3. $50 - 45 = \underline{\quad}$



4. $30 - 15 = \underline{\quad}$



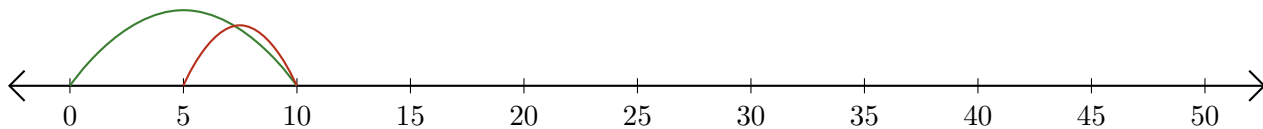
5. $50 - 40 = \underline{\quad}$



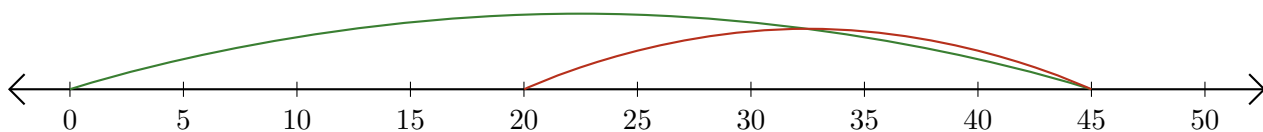
Subtracting on Number Lines (E) Answers

Use the number lines to calculate each difference.

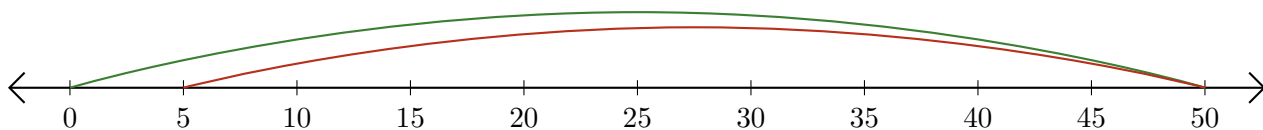
1. $10 - 5 = \underline{5}$



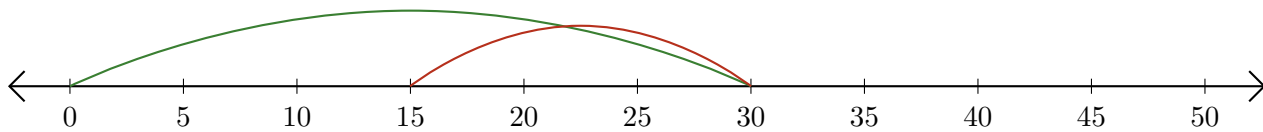
2. $45 - 25 = \underline{20}$



3. $50 - 45 = \underline{5}$



4. $30 - 15 = \underline{15}$



5. $50 - 40 = \underline{10}$

