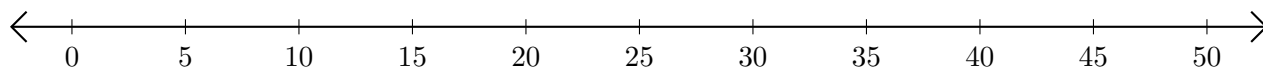


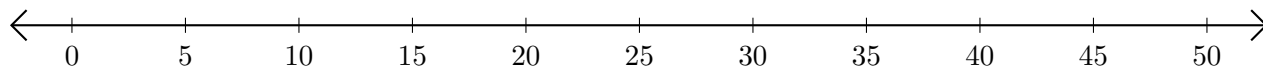
## Subtracting on Number Lines (F)

Use the number lines to calculate each difference.

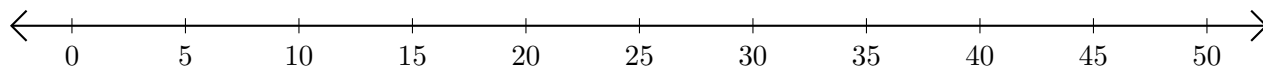
1.  $45 - 35 = \underline{\quad}$



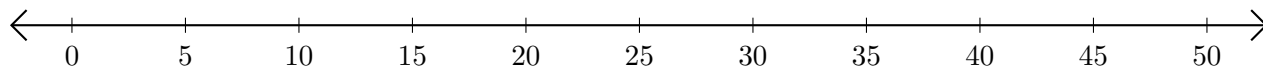
2.  $50 - 40 = \underline{\quad}$



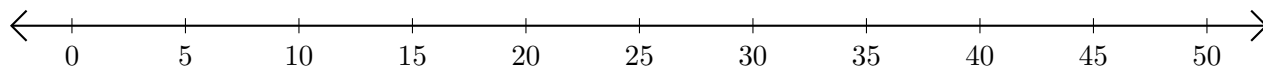
3.  $45 - 30 = \underline{\quad}$



4.  $40 - 20 = \underline{\quad}$



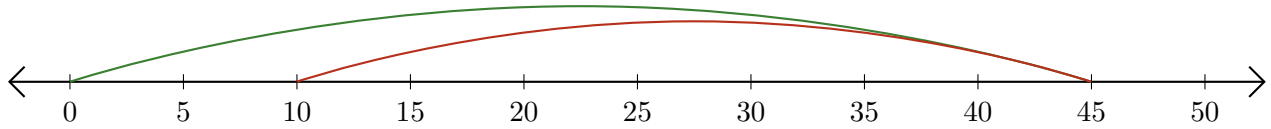
5.  $40 - 15 = \underline{\quad}$



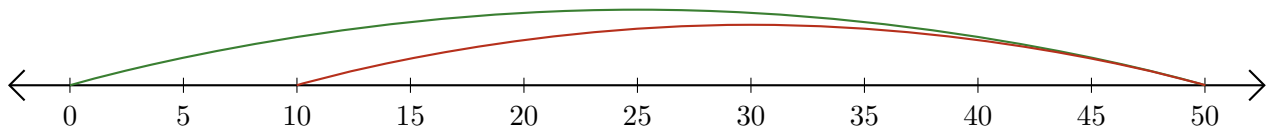
# Subtracting on Number Lines (F) Answers

Use the number lines to calculate each difference.

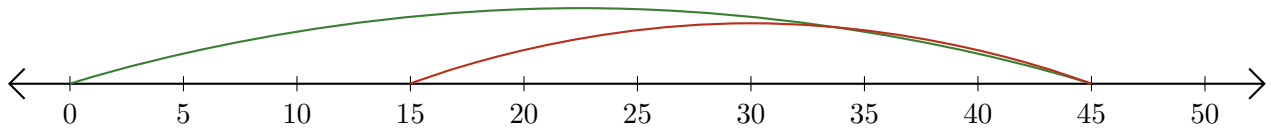
1.  $45 - 35 = \underline{10}$



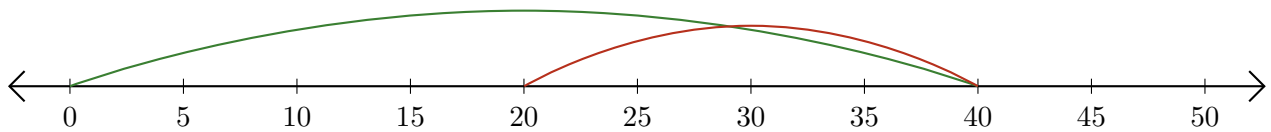
2.  $50 - 40 = \underline{10}$



3.  $45 - 30 = \underline{15}$



4.  $40 - 20 = \underline{20}$



5.  $40 - 15 = \underline{25}$

