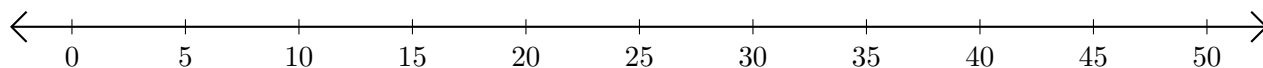


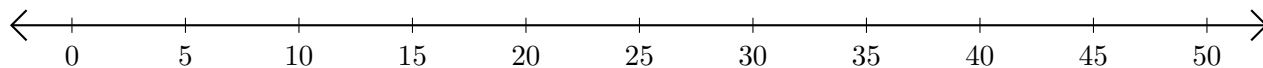
Subtracting on Number Lines (F)

Use the number lines to calculate each difference.

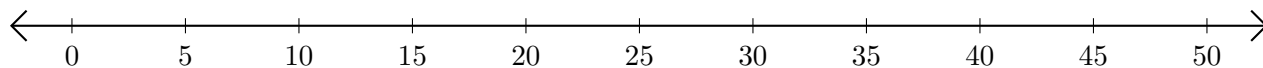
1. $45 - 35 = \underline{\quad}$



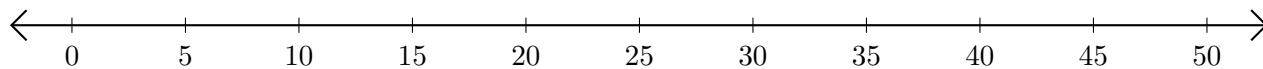
2. $50 - 40 = \underline{\quad}$



3. $45 - 30 = \underline{\quad}$



4. $40 - 20 = \underline{\quad}$



5. $40 - 15 = \underline{\quad}$

