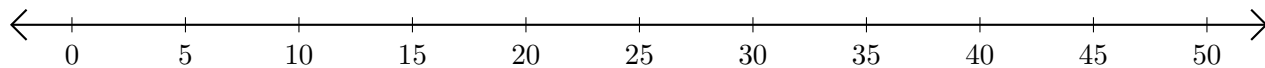


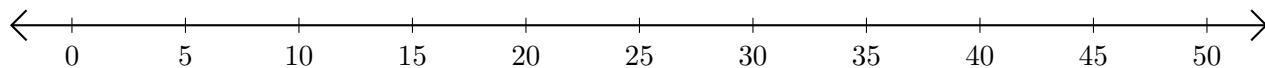
# Subtracting on Number Lines (I)

Use the number lines to calculate each difference.

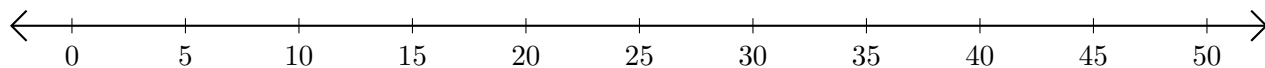
1.  $45 - 40 = \underline{\quad}$



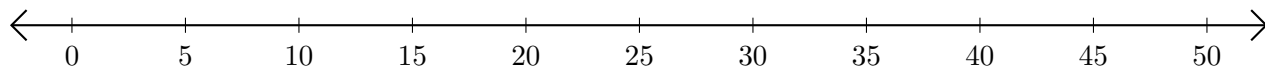
2.  $45 - 25 = \underline{\quad}$



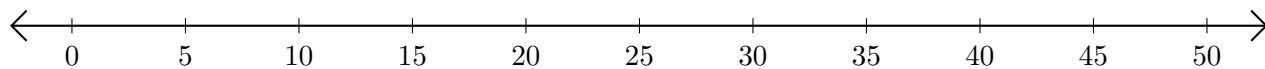
3.  $40 - 35 = \underline{\quad}$



4.  $35 - 30 = \underline{\quad}$



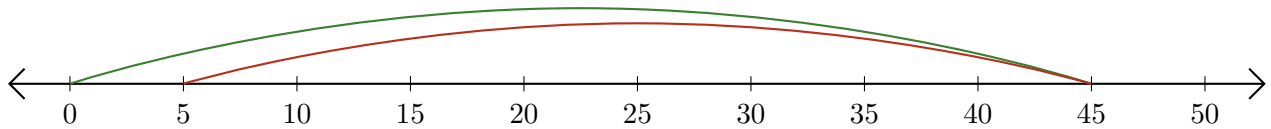
5.  $20 - 5 = \underline{\quad}$



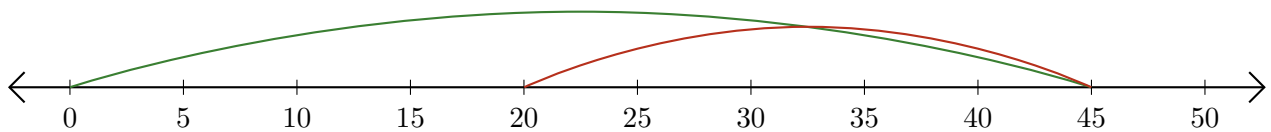
# Subtracting on Number Lines (I) Answers

Use the number lines to calculate each difference.

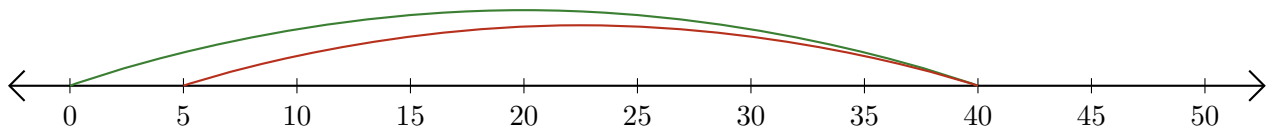
1.  $45 - 40 = \underline{5}$



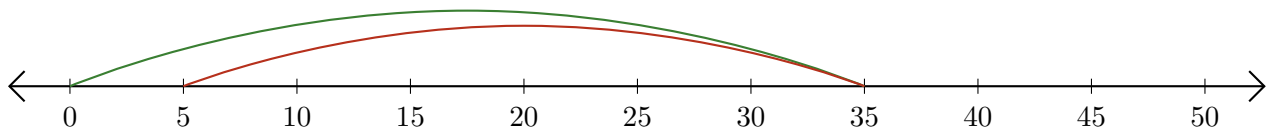
2.  $45 - 25 = \underline{20}$



3.  $40 - 35 = \underline{5}$



4.  $35 - 30 = \underline{5}$



5.  $20 - 5 = \underline{15}$

