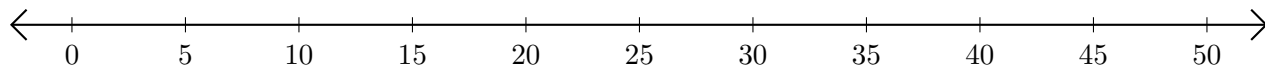


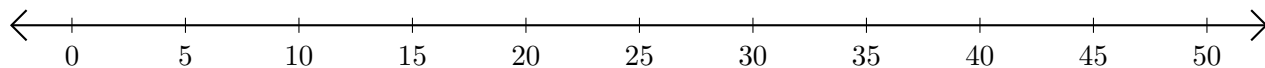
Subtracting on Number Lines (I)

Use the number lines to calculate each difference.

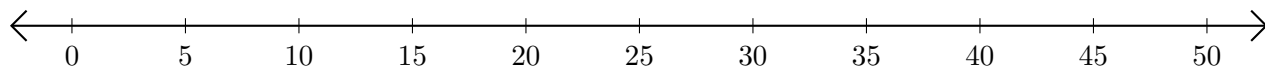
1. $45 - 40 = \underline{\quad}$



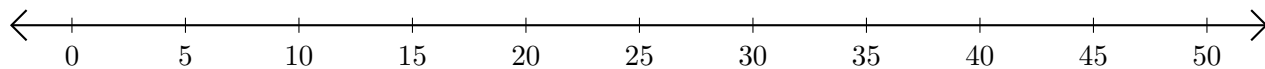
2. $45 - 25 = \underline{\quad}$



3. $40 - 35 = \underline{\quad}$



4. $35 - 30 = \underline{\quad}$



5. $20 - 5 = \underline{\quad}$

