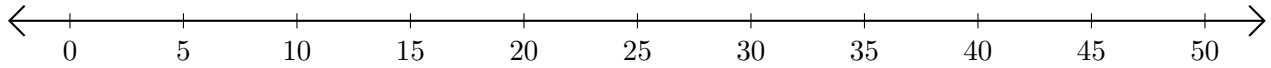


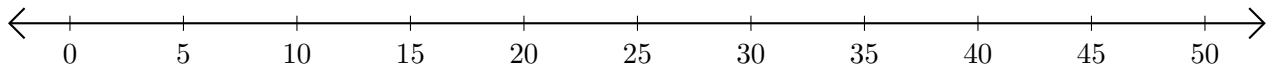
## Subtracting on Number Lines (J)

Use the number lines to calculate each difference.

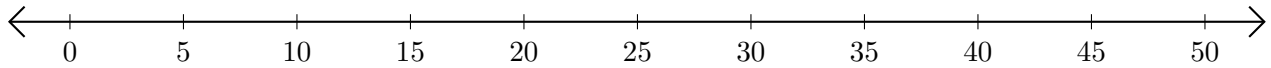
1.  $25 - 20 = \underline{\quad}$



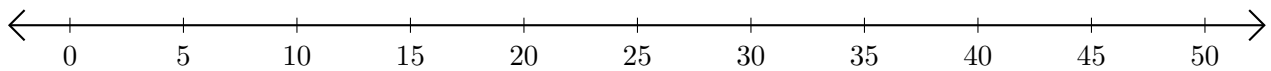
2.  $20 - 15 = \underline{\quad}$



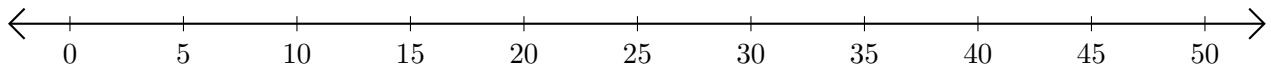
3.  $50 - 25 = \underline{\quad}$



4.  $50 - 45 = \underline{\quad}$



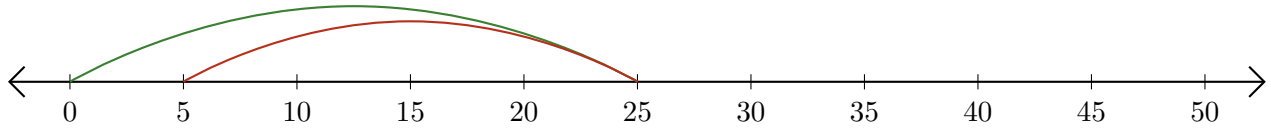
5.  $45 - 5 = \underline{\quad}$



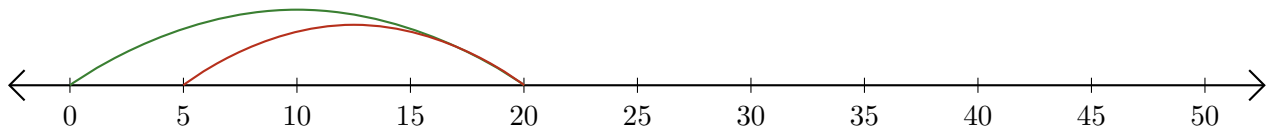
# Subtracting on Number Lines (J) Answers

Use the number lines to calculate each difference.

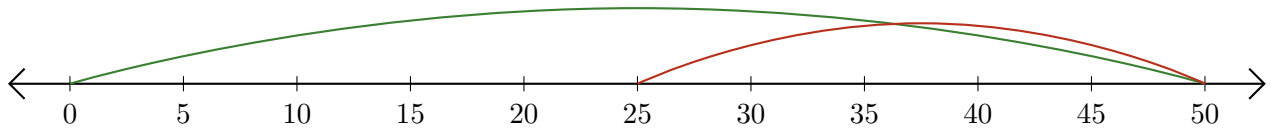
1.  $25 - 20 = \underline{5}$



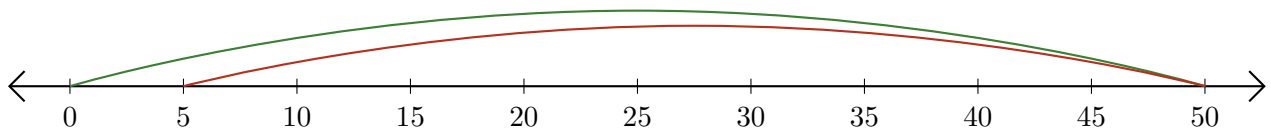
2.  $20 - 15 = \underline{5}$



3.  $50 - 25 = \underline{25}$



4.  $50 - 45 = \underline{5}$



5.  $45 - 5 = \underline{40}$

