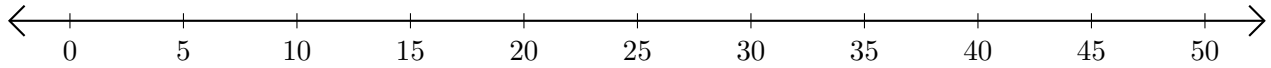


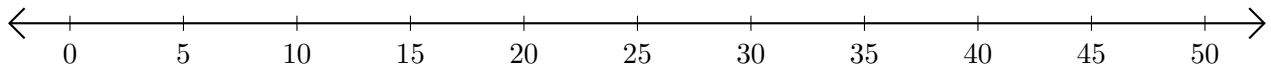
Subtracting on Number Lines (J)

Use the number lines to calculate each difference.

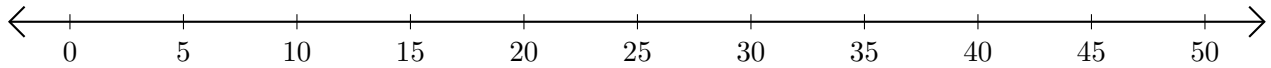
1. $25 - 20 = \underline{\quad}$



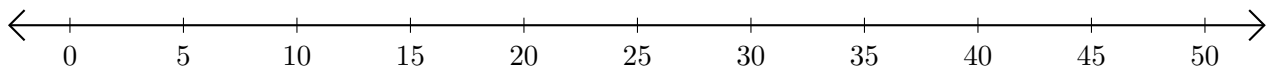
2. $20 - 15 = \underline{\quad}$



3. $50 - 25 = \underline{\quad}$



4. $50 - 45 = \underline{\quad}$



5. $45 - 5 = \underline{\quad}$

