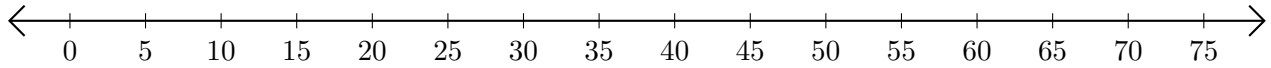


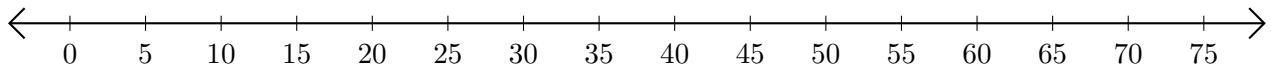
Subtracting on Number Lines (A)

Use the number lines to calculate each difference.

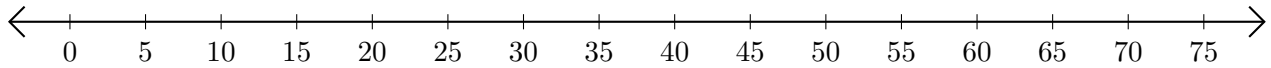
1. $65 - 10 = \underline{\quad}$



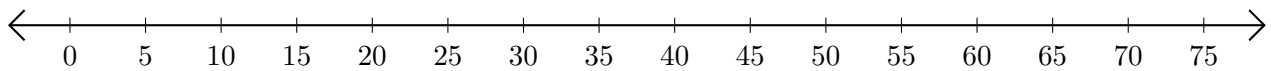
2. $75 - 60 = \underline{\quad}$



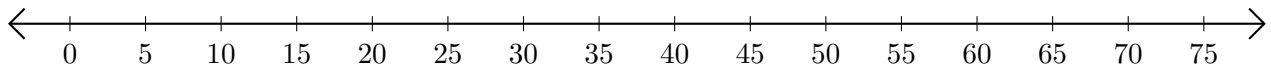
3. $60 - 45 = \underline{\quad}$



4. $35 - 15 = \underline{\quad}$



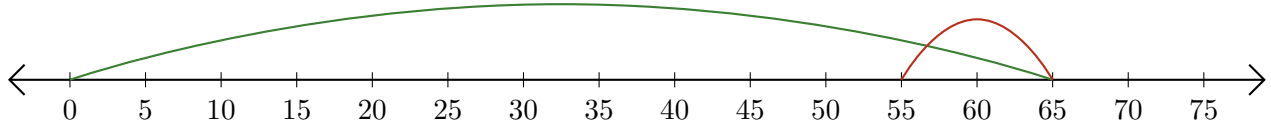
5. $40 - 35 = \underline{\quad}$



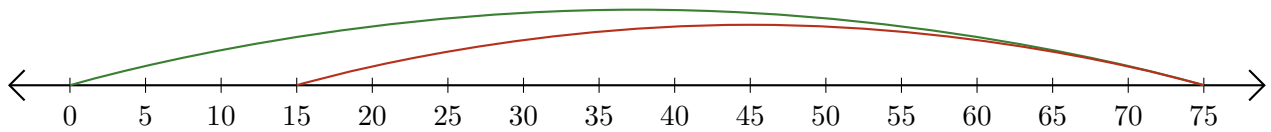
Subtracting on Number Lines (A) Answers

Use the number lines to calculate each difference.

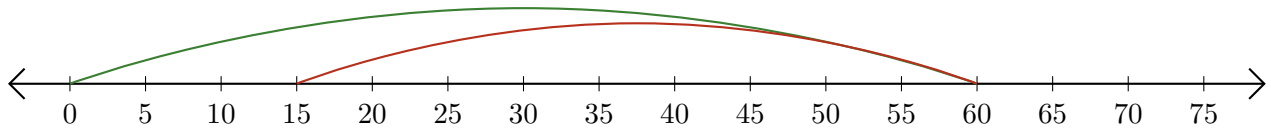
1. $65 - 10 = \underline{55}$



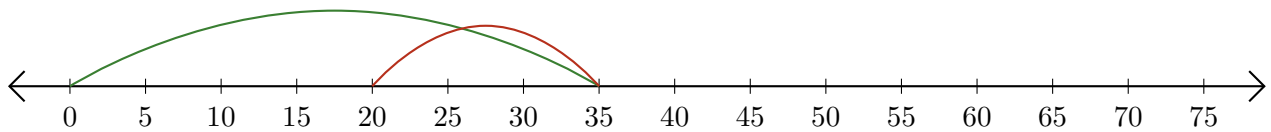
2. $75 - 60 = \underline{15}$



3. $60 - 45 = \underline{15}$



4. $35 - 15 = \underline{20}$



5. $40 - 35 = \underline{5}$

