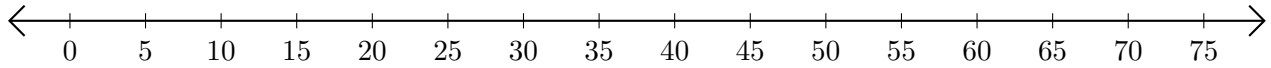


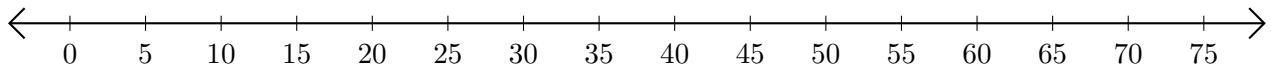
Subtracting on Number Lines (D)

Use the number lines to calculate each difference.

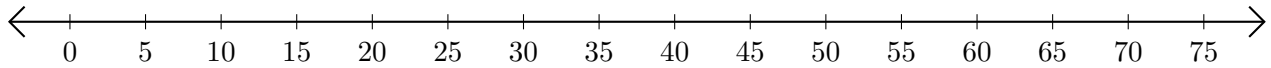
1. $65 - 15 = \underline{\quad}$



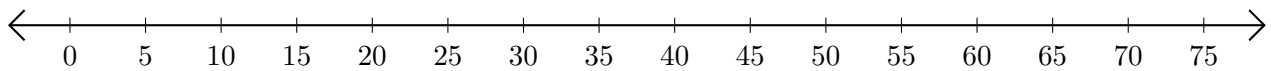
2. $35 - 20 = \underline{\quad}$



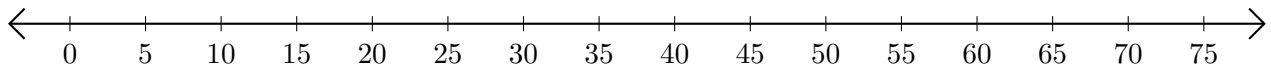
3. $75 - 70 = \underline{\quad}$



4. $75 - 65 = \underline{\quad}$



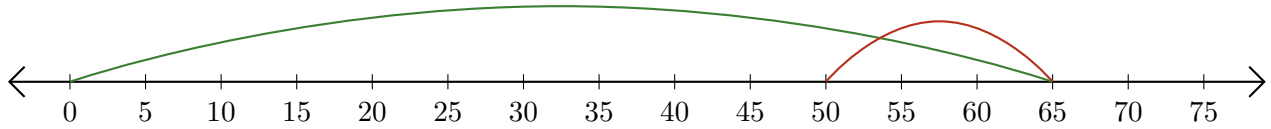
5. $70 - 35 = \underline{\quad}$



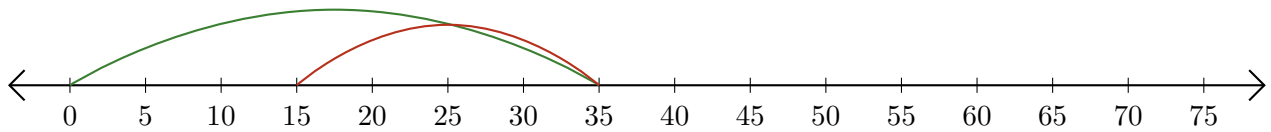
Subtracting on Number Lines (D) Answers

Use the number lines to calculate each difference.

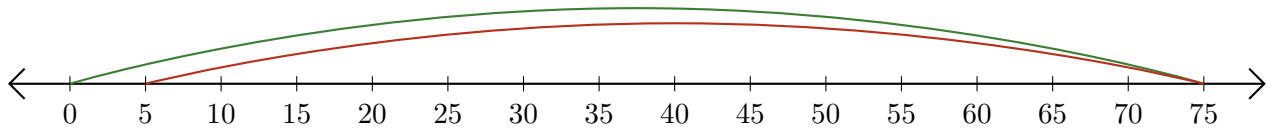
1. $65 - 15 = \underline{50}$



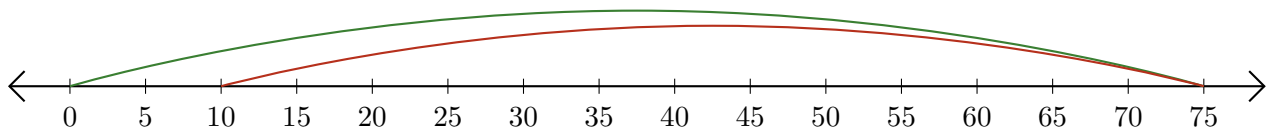
2. $35 - 20 = \underline{15}$



3. $75 - 70 = \underline{5}$



4. $75 - 65 = \underline{10}$



5. $70 - 35 = \underline{35}$

