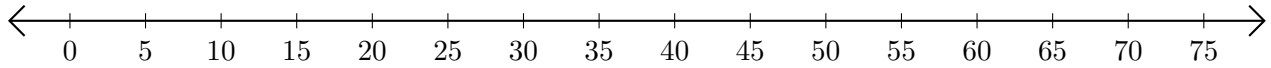


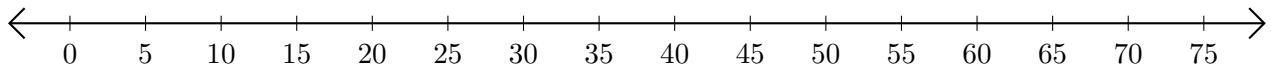
## Subtracting on Number Lines (D)

Use the number lines to calculate each difference.

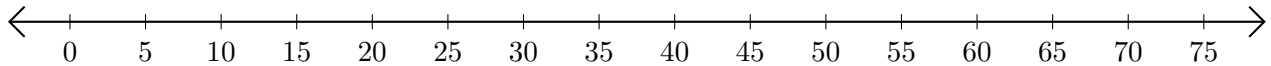
1.  $65 - 15 = \underline{\quad}$



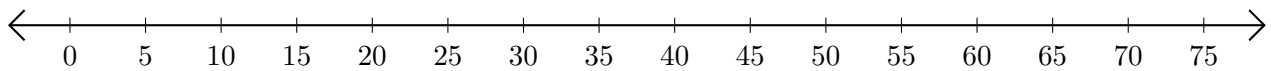
2.  $35 - 20 = \underline{\quad}$



3.  $75 - 70 = \underline{\quad}$



4.  $75 - 65 = \underline{\quad}$



5.  $70 - 35 = \underline{\quad}$

