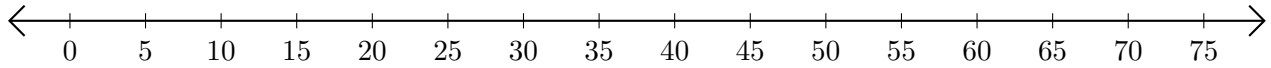


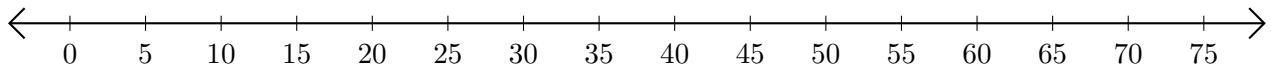
Subtracting on Number Lines (E)

Use the number lines to calculate each difference.

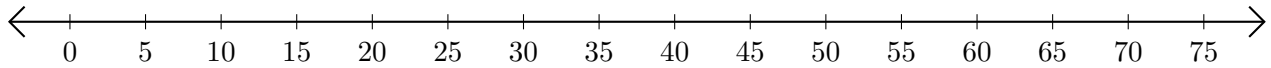
1. $35 - 10 = \underline{\quad}$



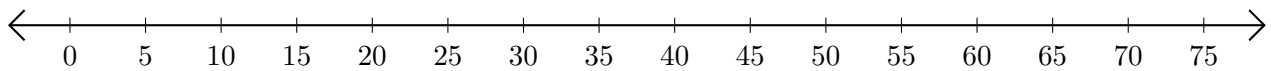
2. $75 - 55 = \underline{\quad}$



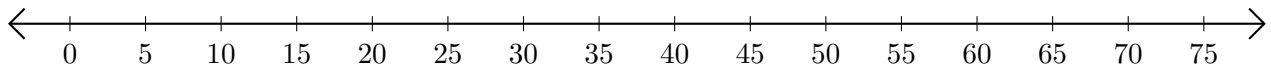
3. $75 - 20 = \underline{\quad}$



4. $75 - 70 = \underline{\quad}$



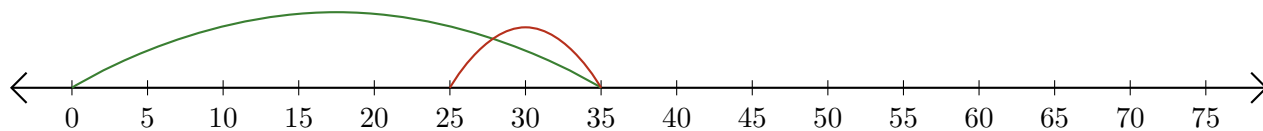
5. $55 - 50 = \underline{\quad}$



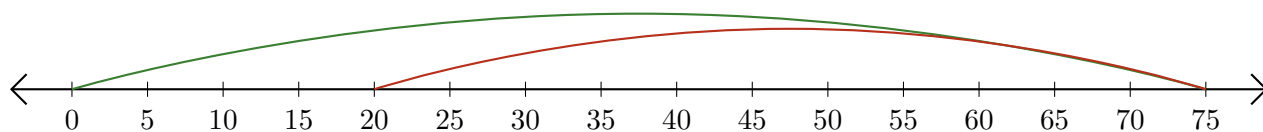
Subtracting on Number Lines (E) Answers

Use the number lines to calculate each difference.

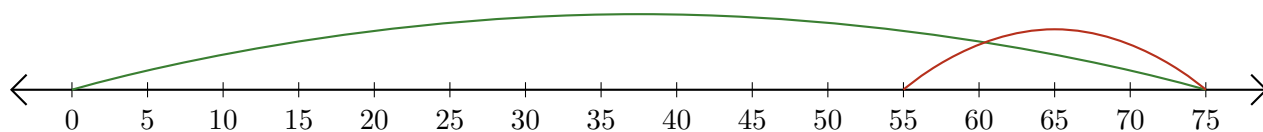
1. $35 - 10 = \underline{25}$



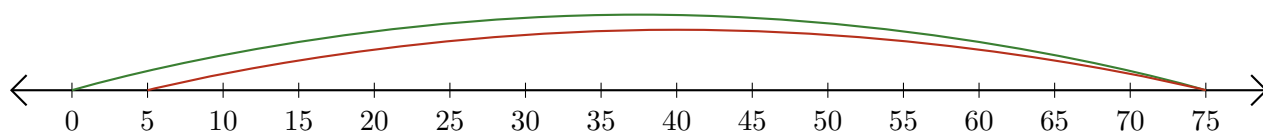
2. $75 - 55 = \underline{20}$



3. $75 - 20 = \underline{55}$



4. $75 - 70 = \underline{5}$



5. $55 - 50 = \underline{5}$

