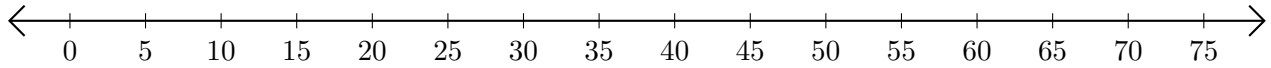


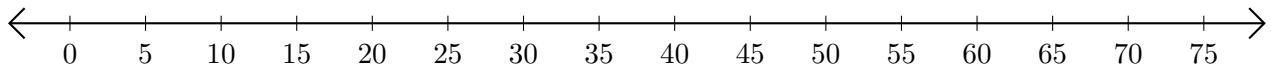
Subtracting on Number Lines (G)

Use the number lines to calculate each difference.

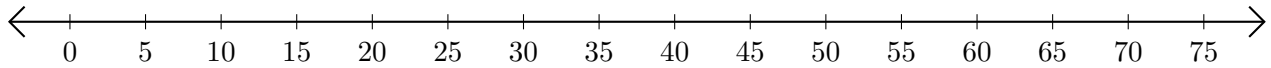
1. $60 - 55 = \underline{\quad}$



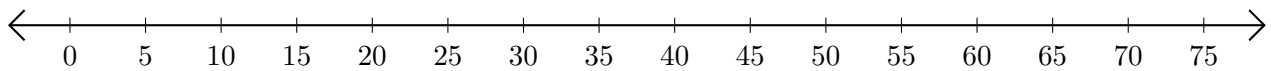
2. $50 - 35 = \underline{\quad}$



3. $70 - 65 = \underline{\quad}$



4. $75 - 45 = \underline{\quad}$



5. $55 - 15 = \underline{\quad}$

