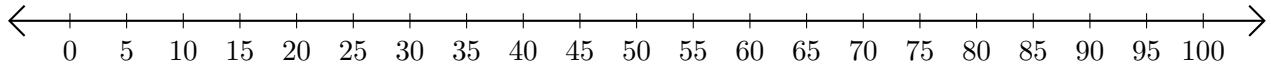


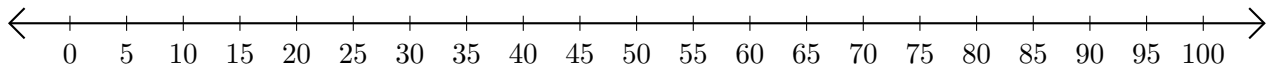
Subtracting on Number Lines (A)

Use the number lines to calculate each difference.

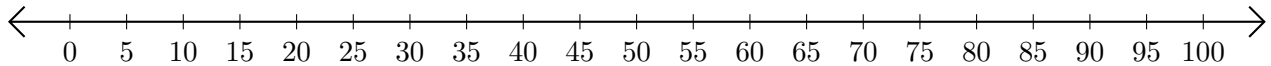
1. $75 - 70 = \underline{\quad}$



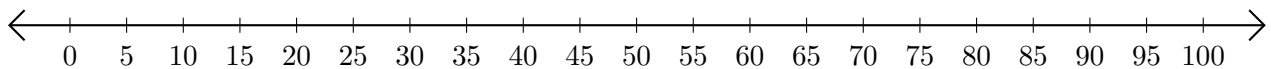
2. $35 - 15 = \underline{\quad}$



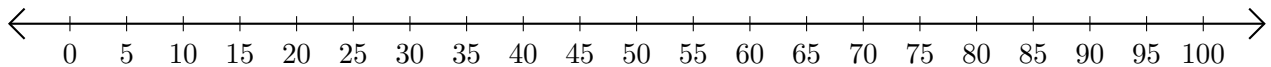
3. $100 - 40 = \underline{\quad}$



4. $85 - 35 = \underline{\quad}$



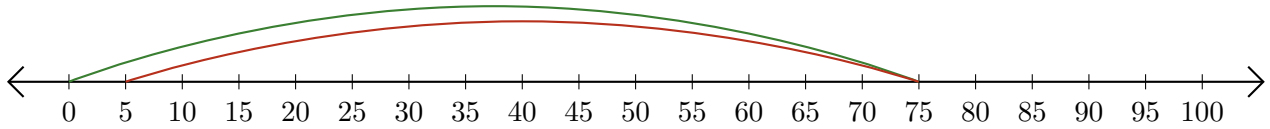
5. $100 - 95 = \underline{\quad}$



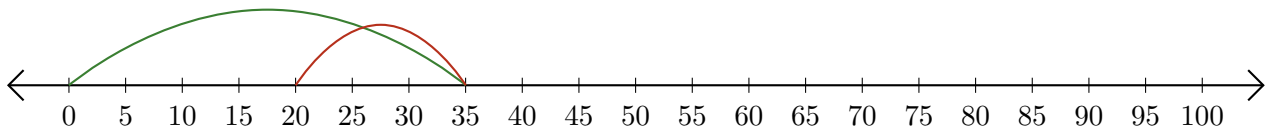
Subtracting on Number Lines (A) Answers

Use the number lines to calculate each difference.

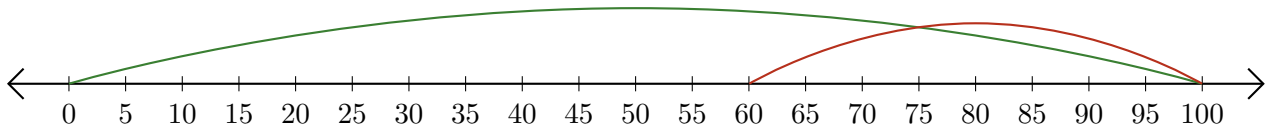
1. $75 - 70 = \underline{5}$



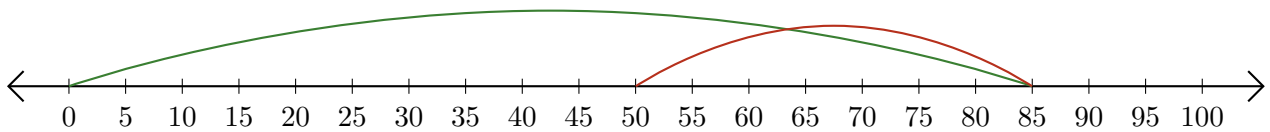
2. $35 - 15 = \underline{20}$



3. $100 - 40 = \underline{60}$



4. $85 - 35 = \underline{50}$



5. $100 - 95 = \underline{5}$

