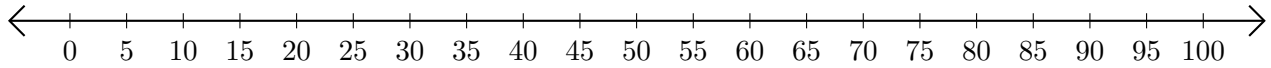


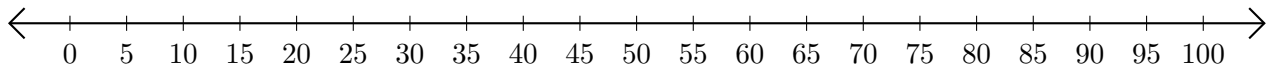
## Subtracting on Number Lines (B)

Use the number lines to calculate each difference.

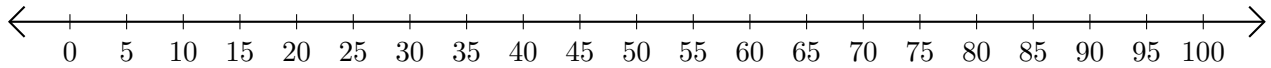
1.  $50 - 15 = \underline{\quad}$



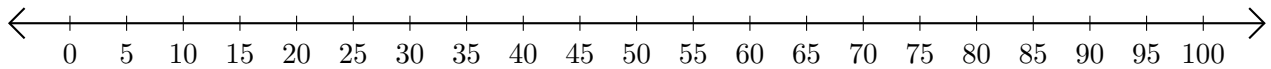
2.  $100 - 65 = \underline{\quad}$



3.  $95 - 90 = \underline{\quad}$



4.  $65 - 40 = \underline{\quad}$



5.  $100 - 95 = \underline{\quad}$

