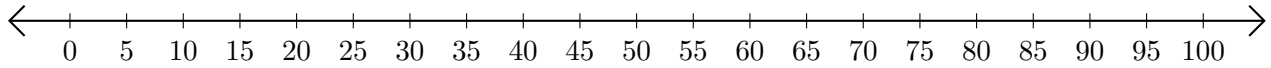


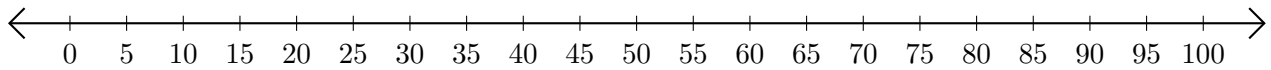
## Subtracting on Number Lines (D)

Use the number lines to calculate each difference.

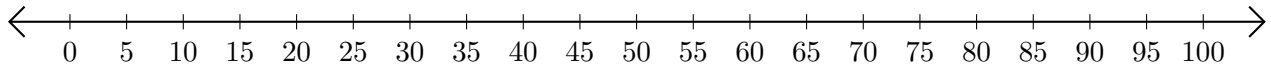
1.  $50 - 15 = \underline{\quad}$



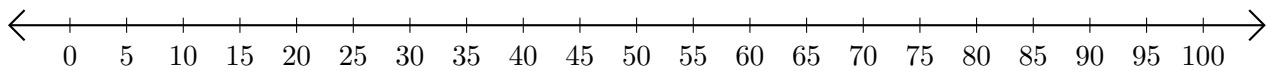
2.  $65 - 60 = \underline{\quad}$



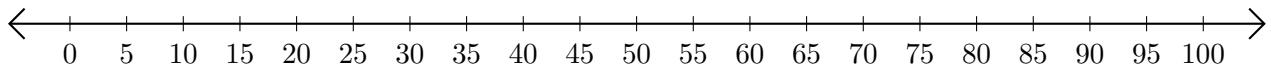
3.  $55 - 10 = \underline{\quad}$



4.  $65 - 30 = \underline{\quad}$



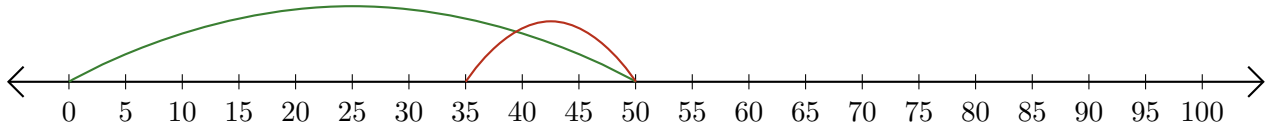
5.  $75 - 25 = \underline{\quad}$



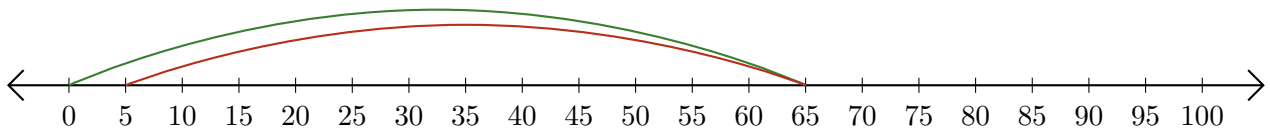
# Subtracting on Number Lines (D) Answers

Use the number lines to calculate each difference.

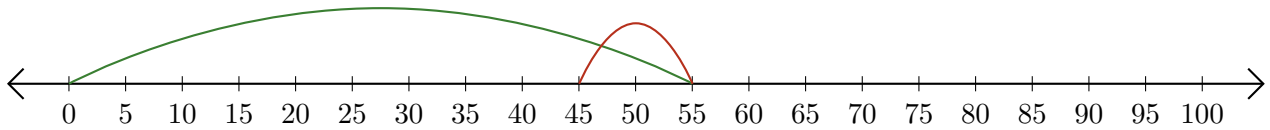
1.  $50 - 15 = \underline{35}$



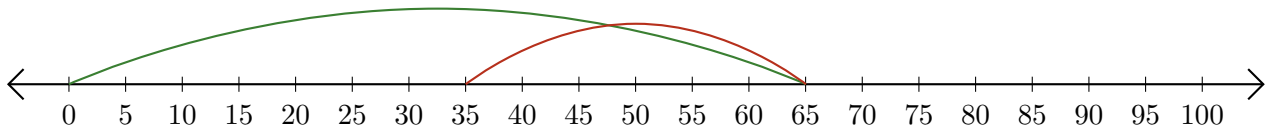
2.  $65 - 60 = \underline{5}$



3.  $55 - 10 = \underline{45}$



4.  $65 - 30 = \underline{35}$



5.  $75 - 25 = \underline{50}$

