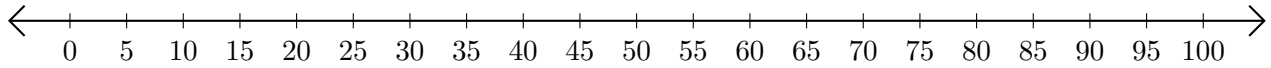


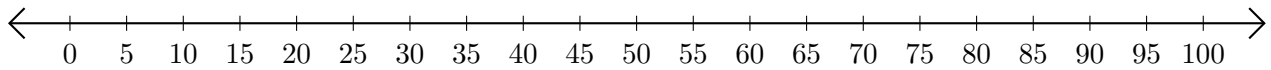
Subtracting on Number Lines (F)

Use the number lines to calculate each difference.

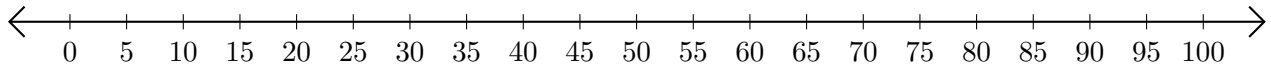
1. $100 - 85 = \underline{\quad}$



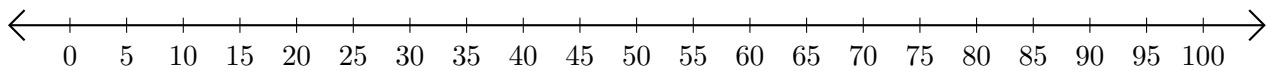
2. $90 - 65 = \underline{\quad}$



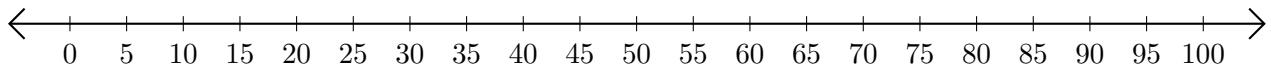
3. $80 - 45 = \underline{\quad}$



4. $100 - 35 = \underline{\quad}$



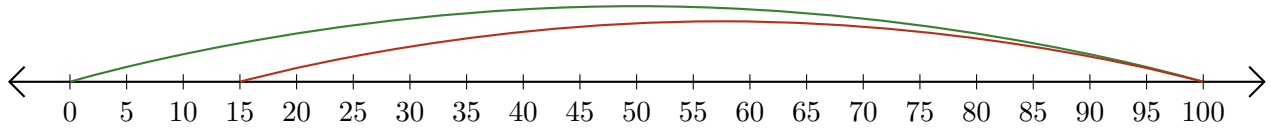
5. $80 - 40 = \underline{\quad}$



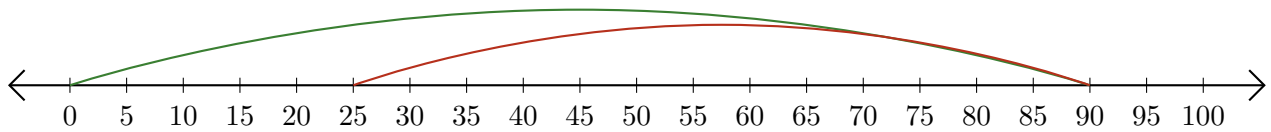
Subtracting on Number Lines (F) Answers

Use the number lines to calculate each difference.

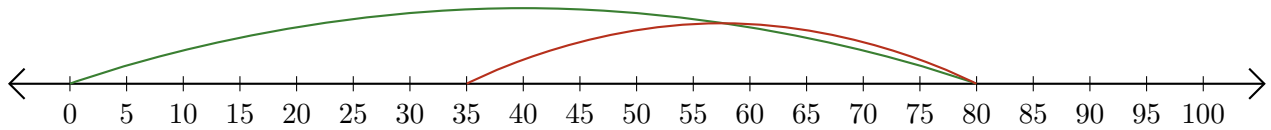
1. $100 - 85 = \underline{15}$



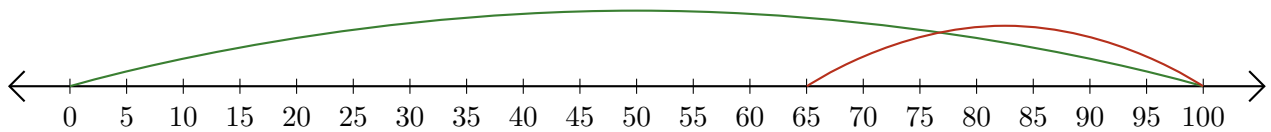
2. $90 - 65 = \underline{25}$



3. $80 - 45 = \underline{35}$



4. $100 - 35 = \underline{65}$



5. $80 - 40 = \underline{40}$

