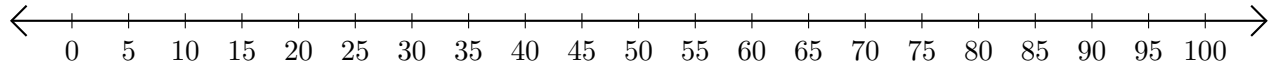


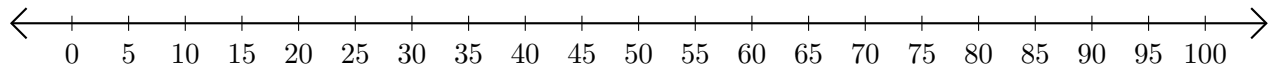
# Subtracting on Number Lines (H)

Use the number lines to calculate each difference.

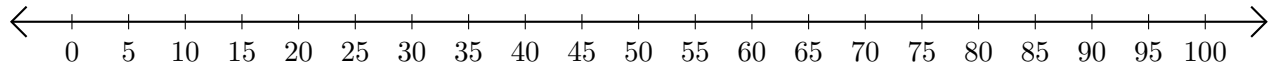
1.  $60 - 55 = \underline{\quad}$



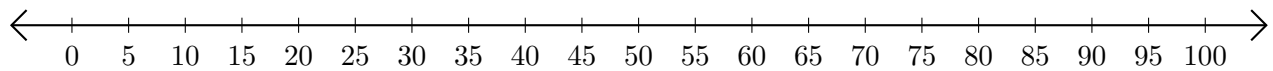
2.  $85 - 25 = \underline{\quad}$



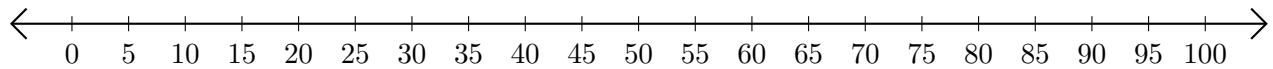
3.  $85 - 65 = \underline{\quad}$



4.  $100 - 75 = \underline{\quad}$



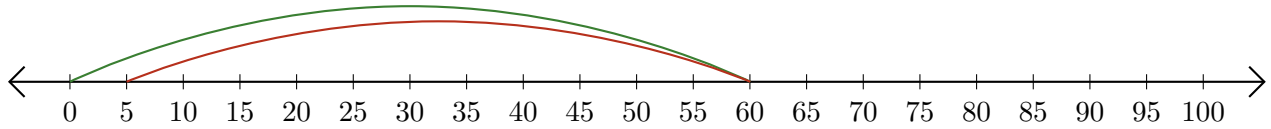
5.  $65 - 35 = \underline{\quad}$



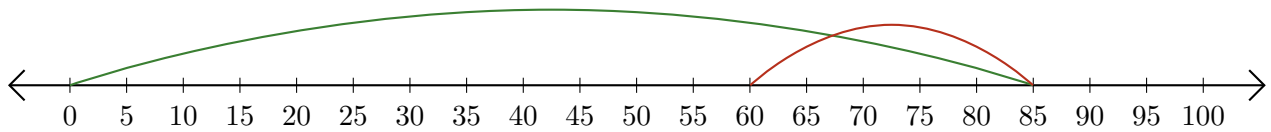
# Subtracting on Number Lines (H) Answers

Use the number lines to calculate each difference.

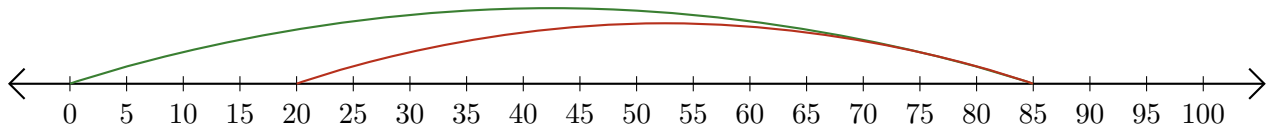
1.  $60 - 55 = \underline{5}$



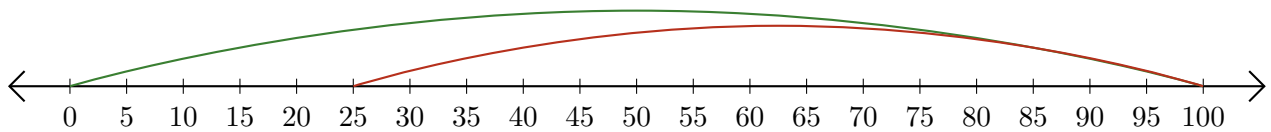
2.  $85 - 25 = \underline{60}$



3.  $85 - 65 = \underline{20}$



4.  $100 - 75 = \underline{25}$



5.  $65 - 35 = \underline{30}$

