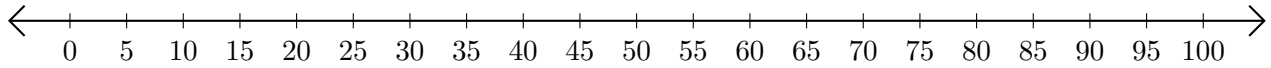


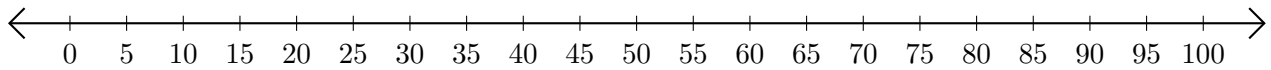
Subtracting on Number Lines (H)

Use the number lines to calculate each difference.

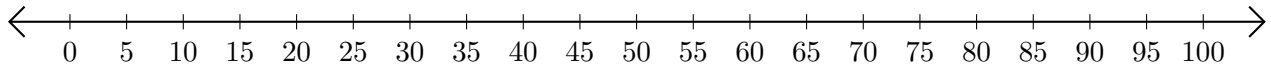
1. $60 - 55 = \underline{\quad}$



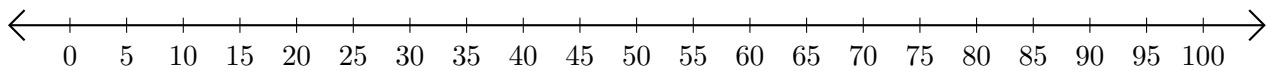
2. $85 - 25 = \underline{\quad}$



3. $85 - 65 = \underline{\quad}$



4. $100 - 75 = \underline{\quad}$



5. $65 - 35 = \underline{\quad}$

