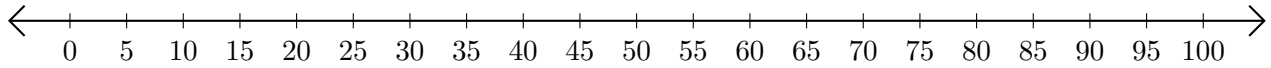


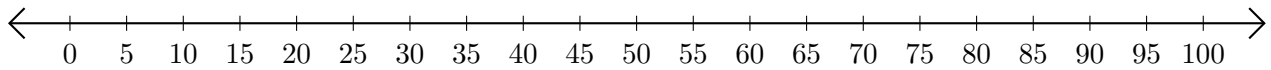
# Subtracting on Number Lines (J)

Use the number lines to calculate each difference.

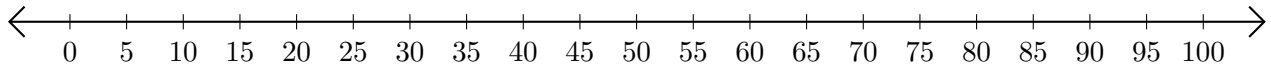
1.  $80 - 20 = \underline{\quad}$



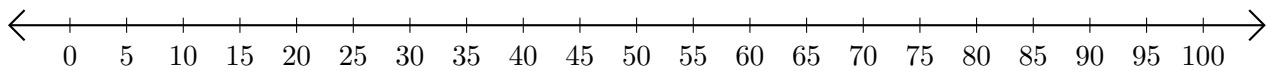
2.  $95 - 85 = \underline{\quad}$



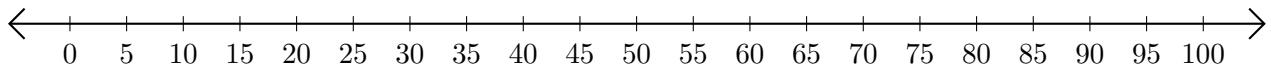
3.  $85 - 65 = \underline{\quad}$



4.  $70 - 30 = \underline{\quad}$



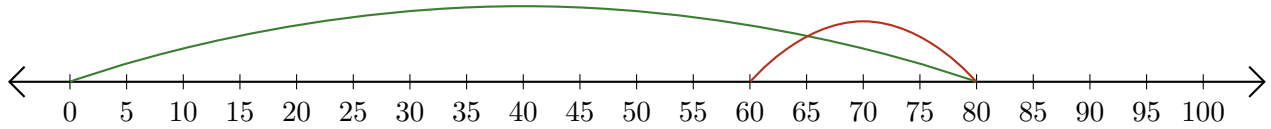
5.  $65 - 15 = \underline{\quad}$



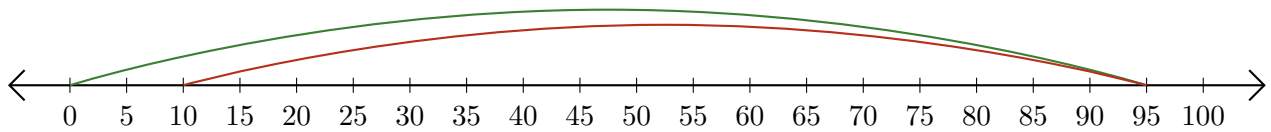
# Subtracting on Number Lines (J) Answers

Use the number lines to calculate each difference.

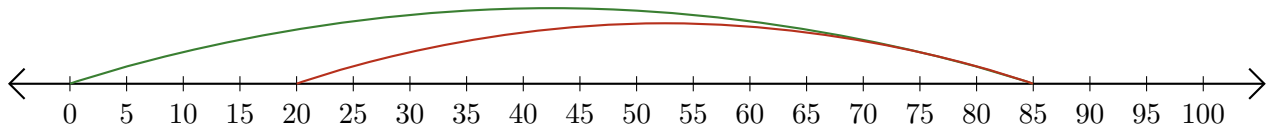
1.  $80 - 20 = \underline{60}$



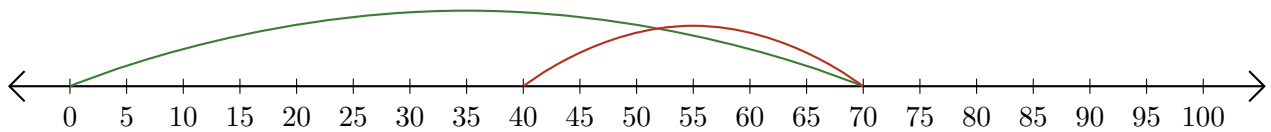
2.  $95 - 85 = \underline{10}$



3.  $85 - 65 = \underline{20}$



4.  $70 - 30 = \underline{40}$



5.  $65 - 15 = \underline{50}$

