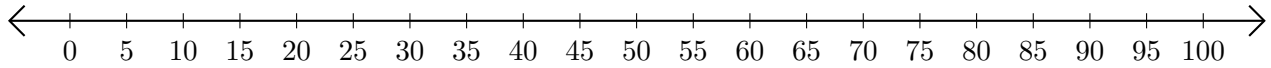


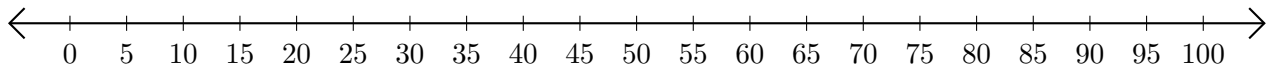
Subtracting on Number Lines (J)

Use the number lines to calculate each difference.

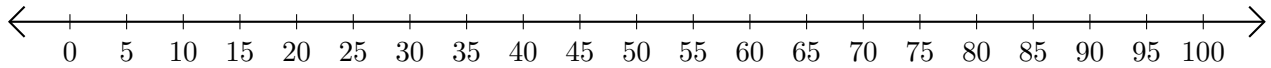
1. $80 - 20 = \underline{\quad}$



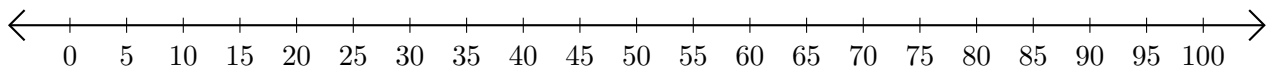
2. $95 - 85 = \underline{\quad}$



3. $85 - 65 = \underline{\quad}$



4. $70 - 30 = \underline{\quad}$



5. $65 - 15 = \underline{\quad}$

