

Subtracting on Number Lines (A)

Use the number lines to calculate each difference.

1. $60 - 40 = \underline{\quad}$



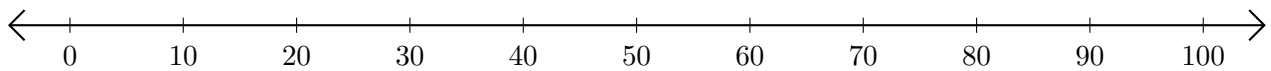
2. $50 - 20 = \underline{\quad}$



3. $100 - 60 = \underline{\quad}$



4. $80 - 70 = \underline{\quad}$



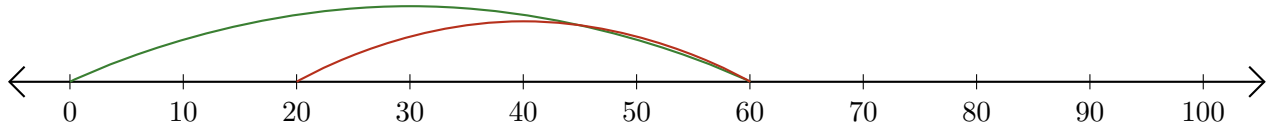
5. $70 - 30 = \underline{\quad}$



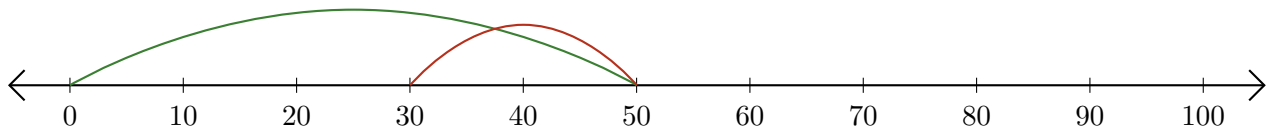
Subtracting on Number Lines (A) Answers

Use the number lines to calculate each difference.

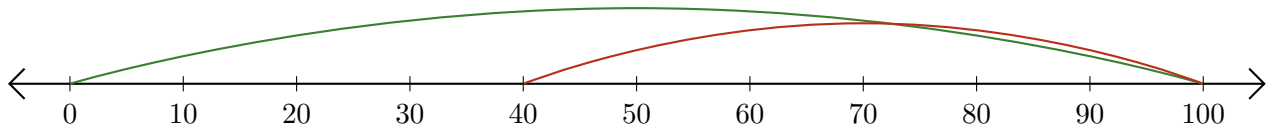
1. $60 - 40 = \underline{20}$



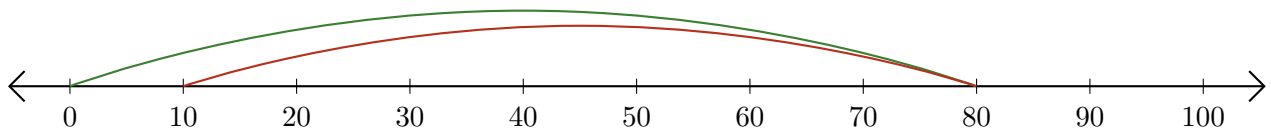
2. $50 - 20 = \underline{30}$



3. $100 - 60 = \underline{40}$



4. $80 - 70 = \underline{10}$



5. $70 - 30 = \underline{40}$

