

Subtracting on Number Lines (B)

Use the number lines to calculate each difference.

1. $100 - 90 = \underline{\quad}$



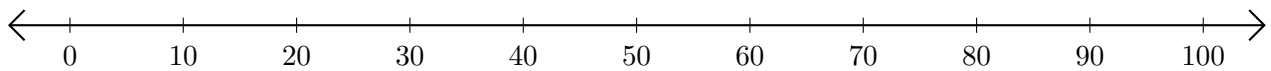
2. $40 - 10 = \underline{\quad}$



3. $60 - 50 = \underline{\quad}$



4. $70 - 40 = \underline{\quad}$



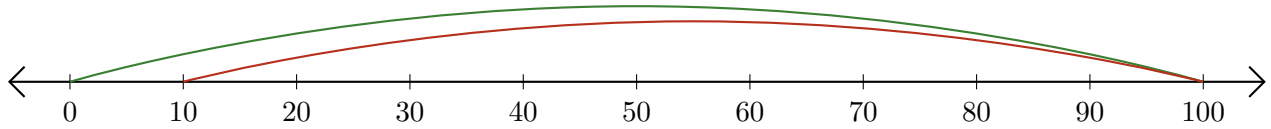
5. $60 - 20 = \underline{\quad}$



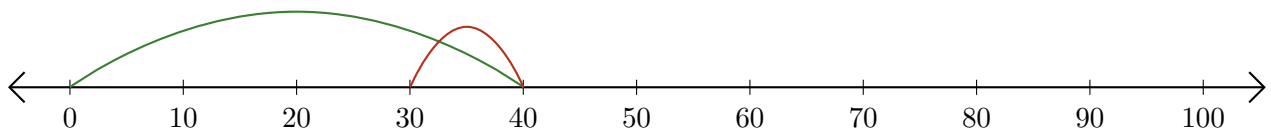
Subtracting on Number Lines (B) Answers

Use the number lines to calculate each difference.

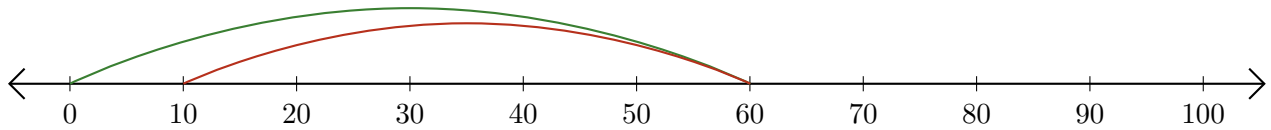
1. $100 - 90 = \underline{10}$



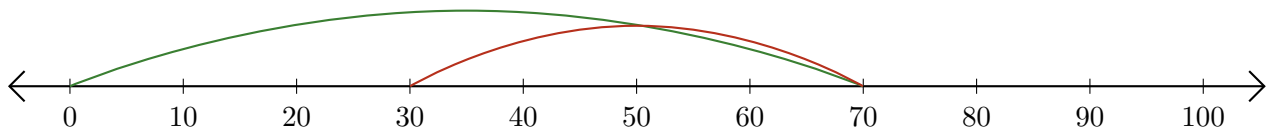
2. $40 - 10 = \underline{30}$



3. $60 - 50 = \underline{10}$



4. $70 - 40 = \underline{30}$



5. $60 - 20 = \underline{40}$

