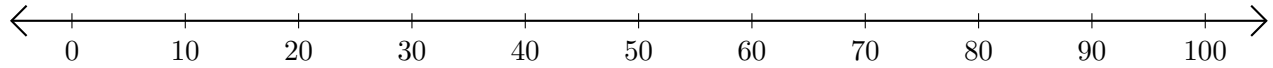


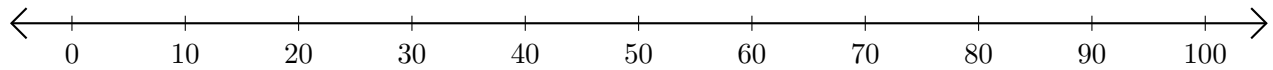
# Subtracting on Number Lines (C)

Use the number lines to calculate each difference.

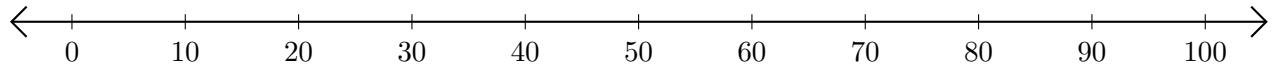
1.  $100 - 70 = \underline{\quad}$



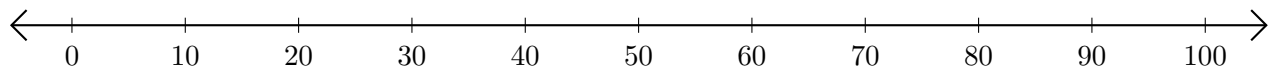
2.  $90 - 80 = \underline{\quad}$



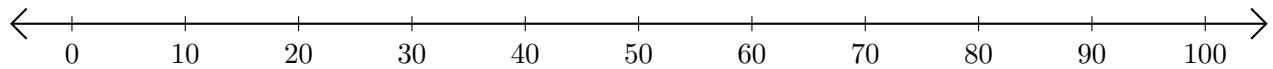
3.  $60 - 40 = \underline{\quad}$



4.  $90 - 60 = \underline{\quad}$



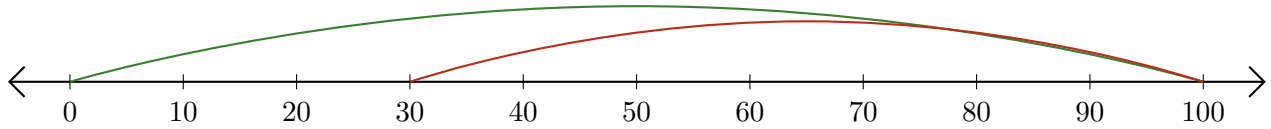
5.  $100 - 30 = \underline{\quad}$



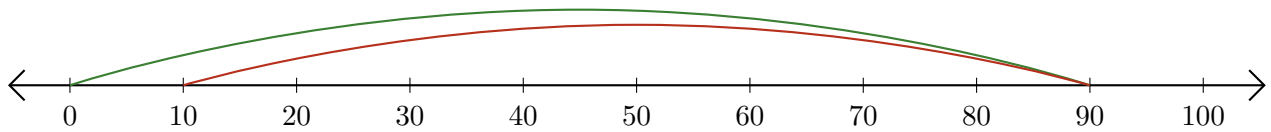
# Subtracting on Number Lines (C) Answers

Use the number lines to calculate each difference.

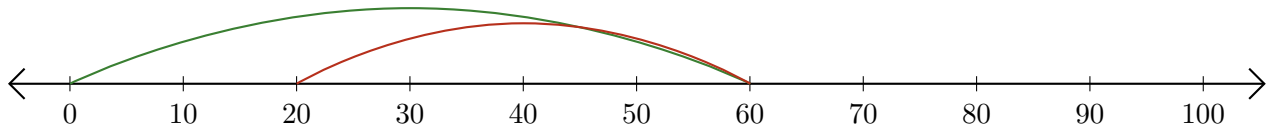
1.  $100 - 70 = \underline{30}$



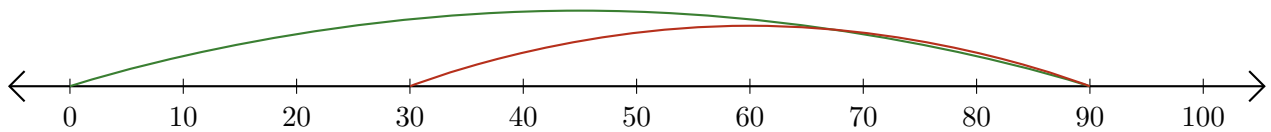
2.  $90 - 80 = \underline{10}$



3.  $60 - 40 = \underline{20}$



4.  $90 - 60 = \underline{30}$



5.  $100 - 30 = \underline{70}$

