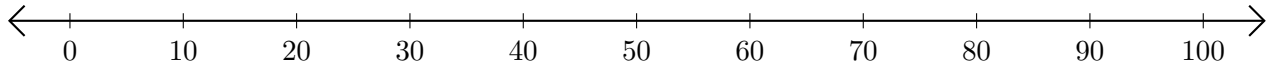


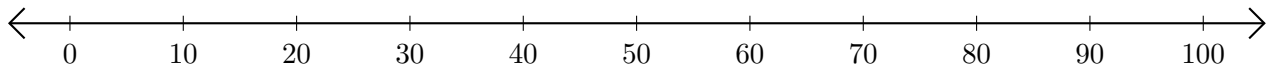
Subtracting on Number Lines (C)

Use the number lines to calculate each difference.

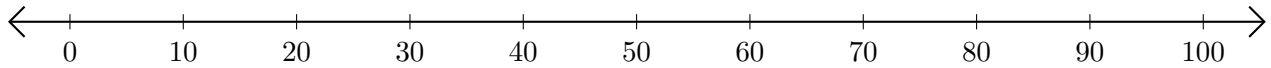
1. $100 - 70 = \underline{\quad}$



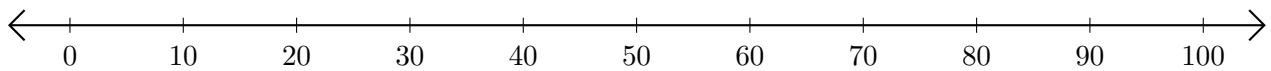
2. $90 - 80 = \underline{\quad}$



3. $60 - 40 = \underline{\quad}$



4. $90 - 60 = \underline{\quad}$



5. $100 - 30 = \underline{\quad}$

