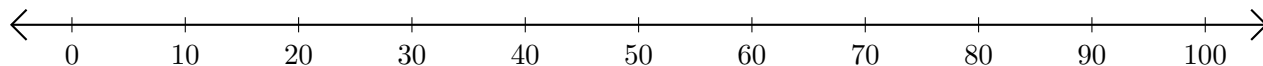


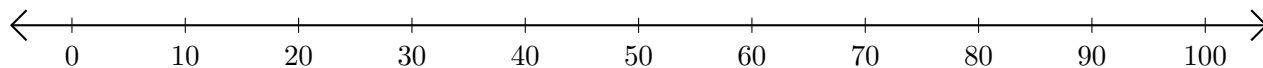
Subtracting on Number Lines (F)

Use the number lines to calculate each difference.

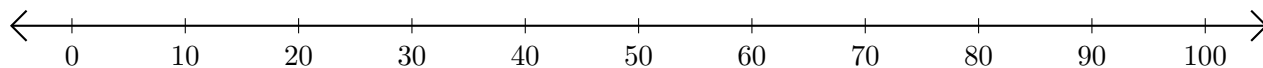
1. $90 - 20 = \underline{\quad}$



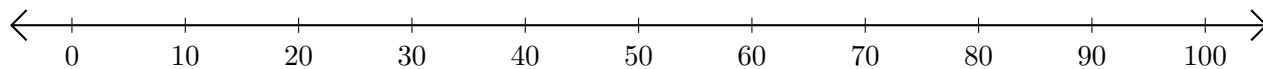
2. $90 - 30 = \underline{\quad}$



3. $100 - 90 = \underline{\quad}$



4. $90 - 80 = \underline{\quad}$



5. $50 - 10 = \underline{\quad}$

