

Subtracting on Number Lines (G)

Use the number lines to calculate each difference.

1. $100 - 40 = \underline{\quad}$



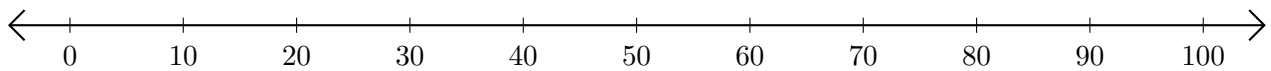
2. $90 - 70 = \underline{\quad}$



3. $100 - 30 = \underline{\quad}$



4. $100 - 60 = \underline{\quad}$



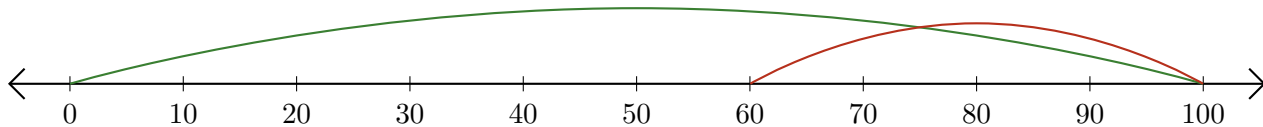
5. $80 - 20 = \underline{\quad}$



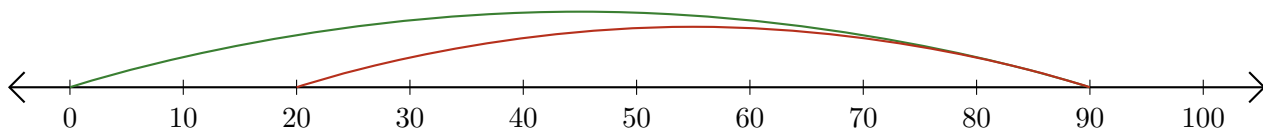
Subtracting on Number Lines (G) Answers

Use the number lines to calculate each difference.

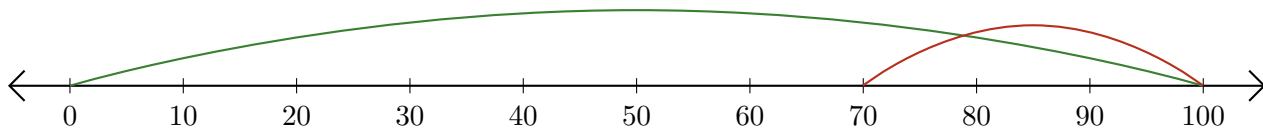
1. $100 - 40 = \underline{60}$



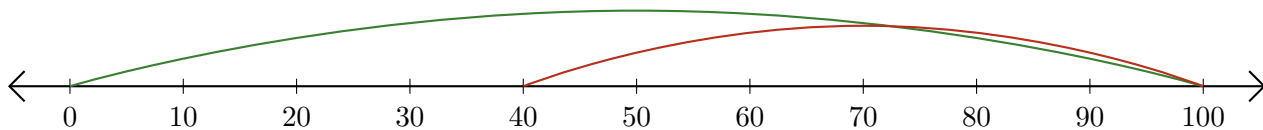
2. $90 - 70 = \underline{20}$



3. $100 - 30 = \underline{70}$



4. $100 - 60 = \underline{40}$



5. $80 - 20 = \underline{60}$

