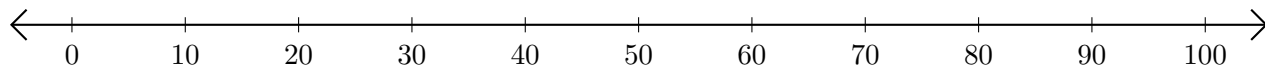


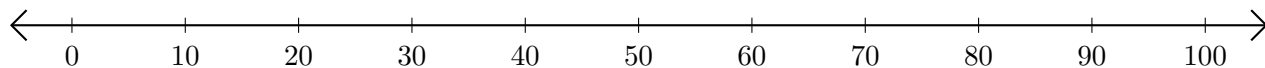
# Subtracting on Number Lines (G)

Use the number lines to calculate each difference.

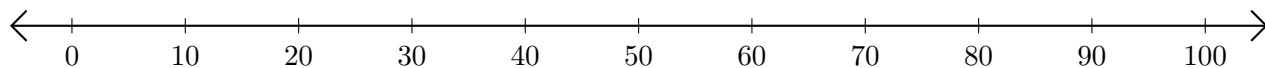
1.  $100 - 40 = \underline{\quad}$



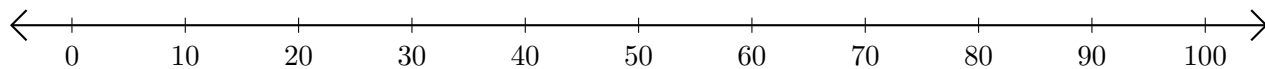
2.  $90 - 70 = \underline{\quad}$



3.  $100 - 30 = \underline{\quad}$



4.  $100 - 60 = \underline{\quad}$



5.  $80 - 20 = \underline{\quad}$

