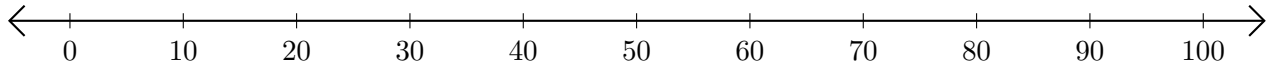


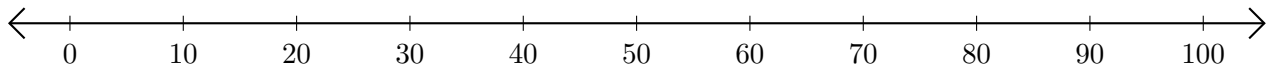
Subtracting on Number Lines (H)

Use the number lines to calculate each difference.

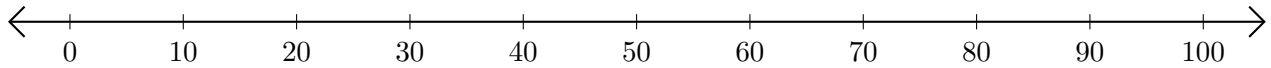
1. $100 - 60 = \underline{\quad}$



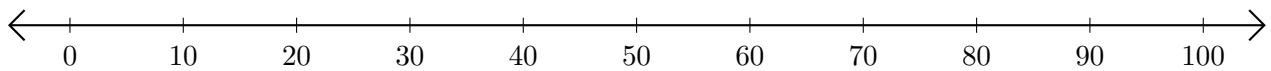
2. $90 - 30 = \underline{\quad}$



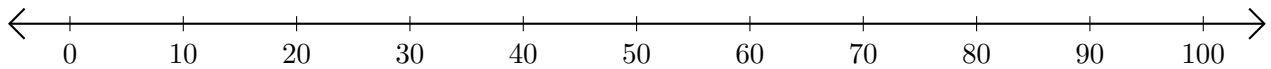
3. $60 - 20 = \underline{\quad}$



4. $90 - 40 = \underline{\quad}$



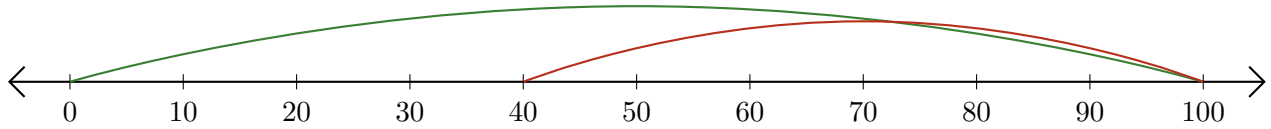
5. $90 - 70 = \underline{\quad}$



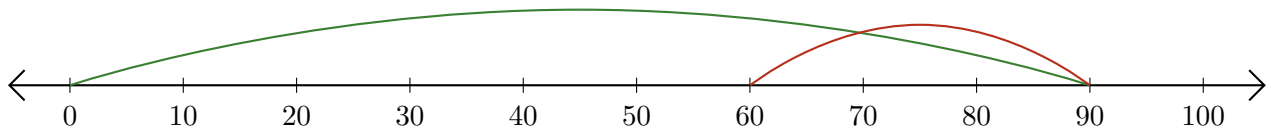
Subtracting on Number Lines (H) Answers

Use the number lines to calculate each difference.

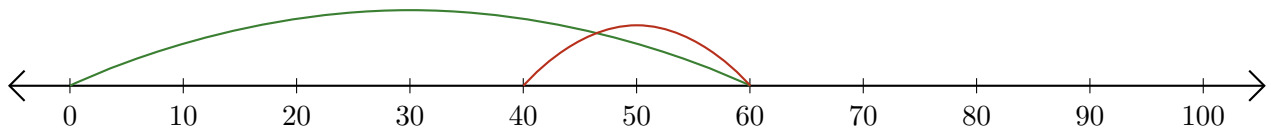
1. $100 - 60 = \underline{40}$



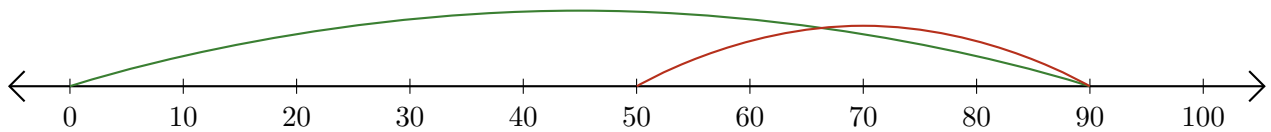
2. $90 - 30 = \underline{60}$



3. $60 - 20 = \underline{40}$



4. $90 - 40 = \underline{50}$



5. $90 - 70 = \underline{20}$

