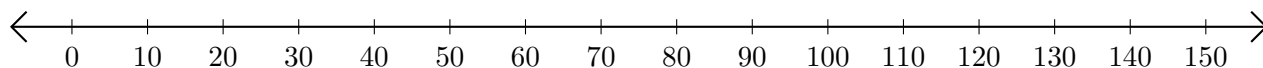


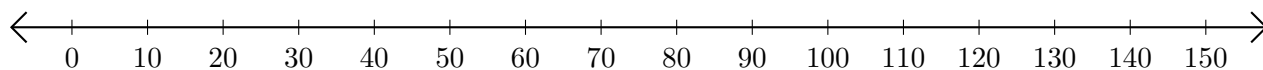
Subtracting on Number Lines (F)

Use the number lines to calculate each difference.

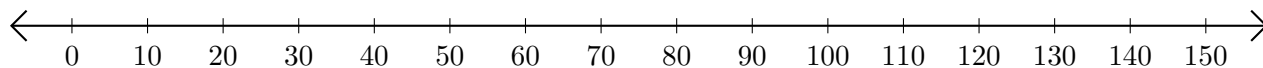
1. $150 - 80 = \underline{\quad}$



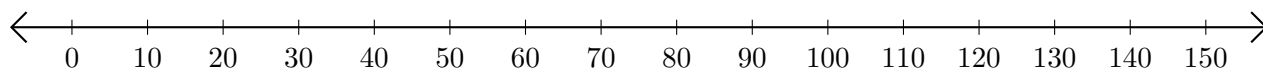
2. $140 - 50 = \underline{\quad}$



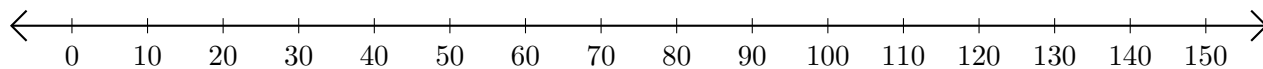
3. $110 - 70 = \underline{\quad}$



4. $120 - 110 = \underline{\quad}$



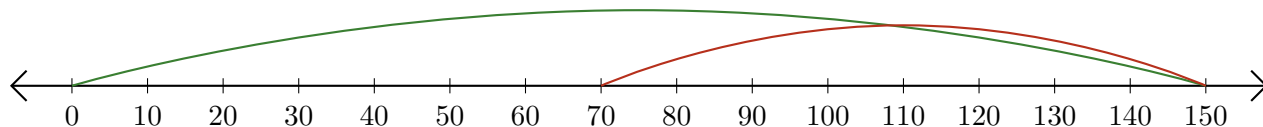
5. $150 - 120 = \underline{\quad}$



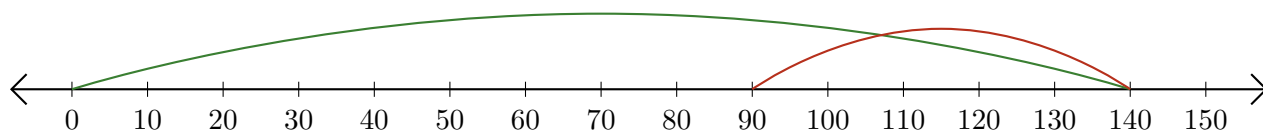
Subtracting on Number Lines (F) Answers

Use the number lines to calculate each difference.

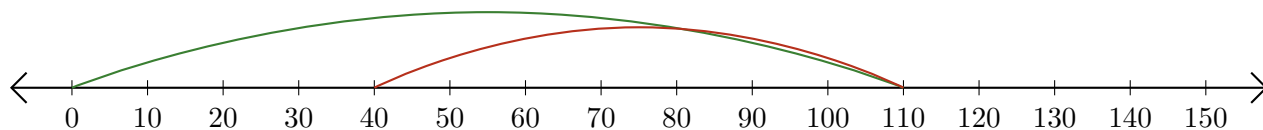
1. $150 - 80 = \underline{70}$



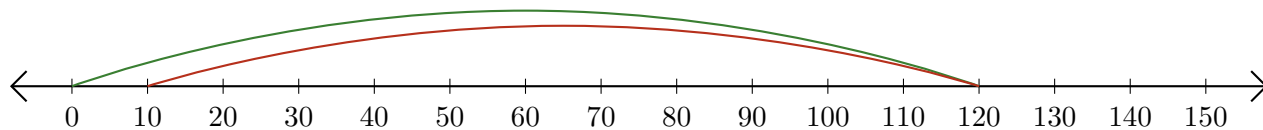
2. $140 - 50 = \underline{90}$



3. $110 - 70 = \underline{40}$



4. $120 - 110 = \underline{10}$



5. $150 - 120 = \underline{30}$

